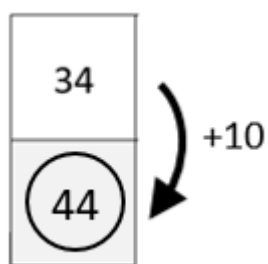
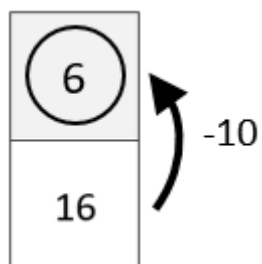


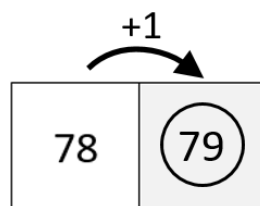
Moving Around the 100 Grid



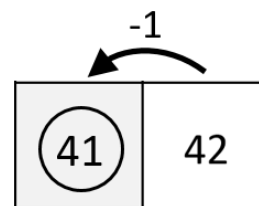
Add 10 each time you
move down



Subtract 10 each time
you move up



Add 1 each time you
move right



Subtract 1 each time
you move left

Use your knowledge of the 100 grid to help you fill in the shaded boxes.

[illegible]