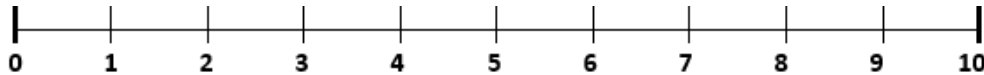


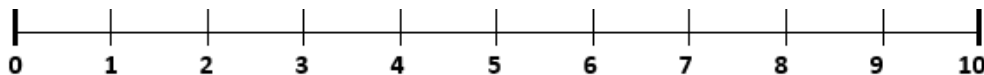
Number Line Addition

Use the number lines to solve the following.
Remember to start from the largest number and then jump the smaller number.

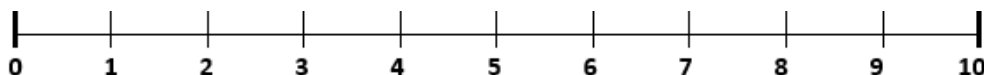
$4 + 3 = \underline{\quad}$



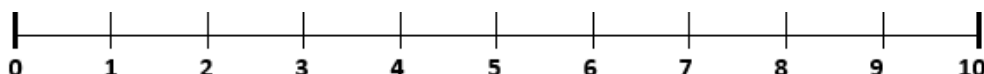
$8 + 2 = \underline{\quad}$



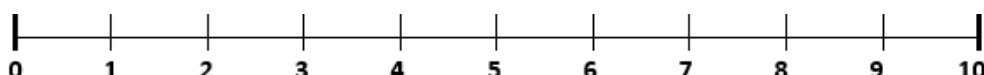
$3 + 6 = \underline{\quad}$



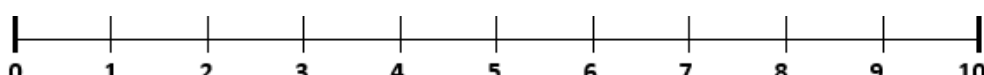
$7 + 2 = \underline{\quad}$



$1 + 5 = \underline{\quad}$



$2 + 6 = \underline{\quad}$



Write the equation that matches the number line.

$\underline{\quad} + \underline{\quad} = \underline{\quad}$



$\underline{\quad} + \underline{\quad} = \underline{\quad}$



$\underline{\quad} + \underline{\quad} = \underline{\quad}$

