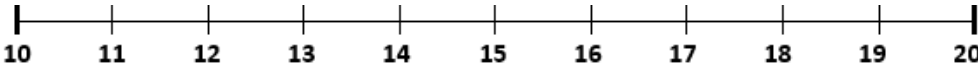
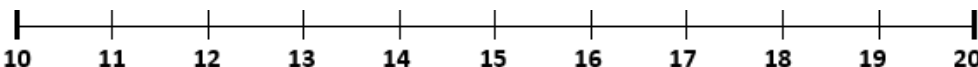


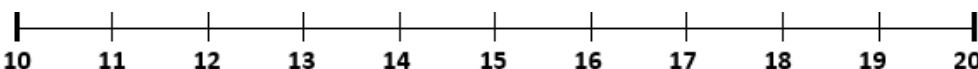
## Number Line Addition to 20

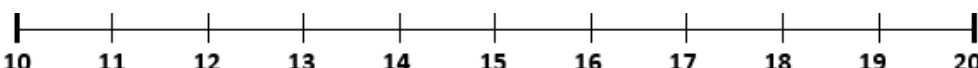
Use the number lines to solve the following.  
Remember to start from the largest number and then jump the smaller number.

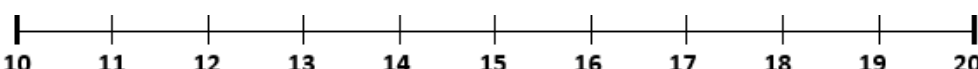
$16 + 2 = \underline{\quad}$ 

$17 + 3 = \underline{\quad}$ 

$11 + 5 = \underline{\quad}$ 

$3 + 12 = \underline{\quad}$ 

$1 + 15 = \underline{\quad}$ 

$3 + 14 = \underline{\quad}$ 

Write the equation that matches the number line.

