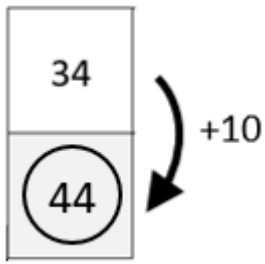
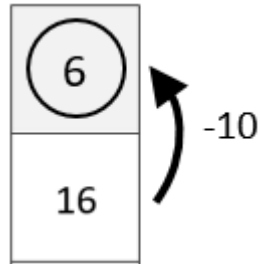


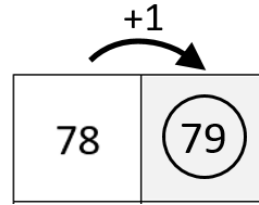
Moving Around the 100 Grid [1]



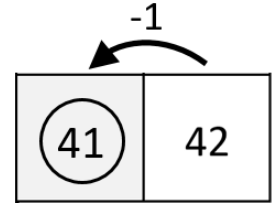
Add 10 each time you move **down**



Subtract 10 each time you move **up**



Add 1 each time you move **right**



Subtract 1 each time you move **left**

Use your knowledge of moving around a 100 grid to help you fill in the shaded boxes.

	3		
			18
	32		
		55	
	72		
		85	
		78	
		98	