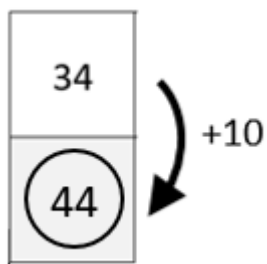
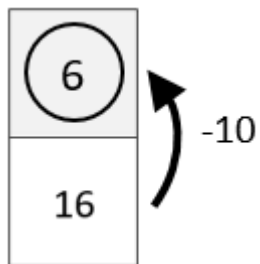


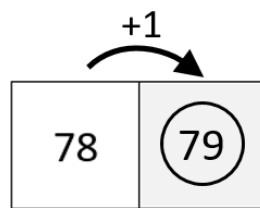
Moving Around the 100 Grid [2]



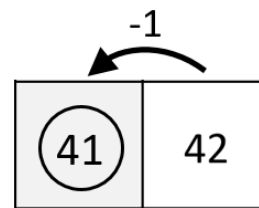
Add 10 each time you move **down**



Subtract 10 each time you move **up**



Add 1 each time you move **right**



Subtract 1 each time you move **left**

Use your knowledge of moving around a 100 grid to help you fill in the shaded boxes.

	12			15			
						28	
	32						
				45			
							59
			63				
							78
			84				