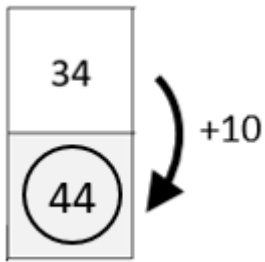
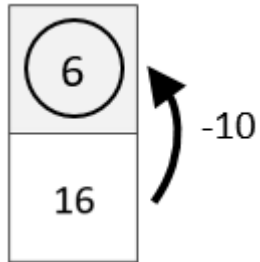


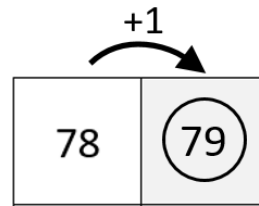
Moving Around the 100 Grid [3]



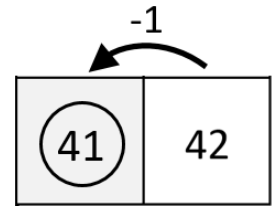
Add 10 each time you move **down**



Subtract 10 each time you move **up**


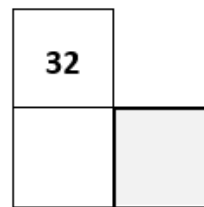
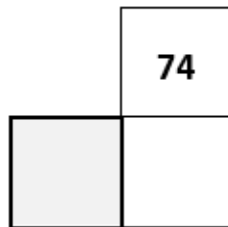
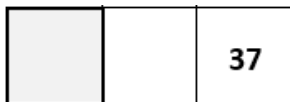



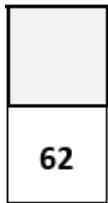


Add 1 each time you move **right**



Subtract 1 each time you move **left**

Use your knowledge of moving around a 100 grid to help you fill in the shaded boxes.



Create your own and challenge a friend to work them out. Make sure you also work out the answers!

