


## Tuckshop Treats!

Spin both spinners (paper clip under a pencil) to help each child decide what they will buy from the school canteen. Then work out the total cost for each child.



Fries \$2



Hotdog \$2.50



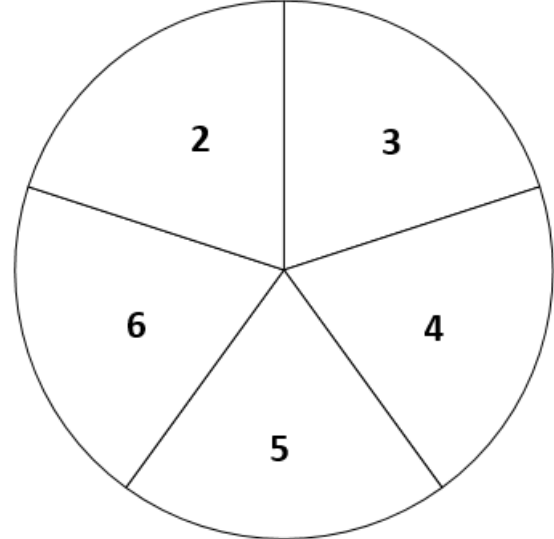
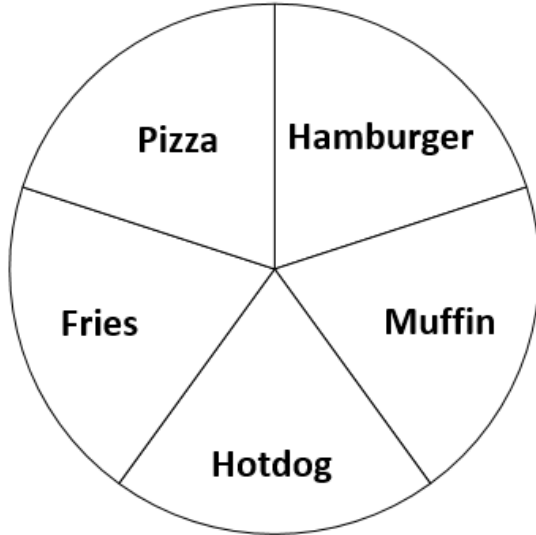
Pizza \$1.50



Burger \$5.00



Muffin 50c



What will Greg buy? \_\_\_\_\_

How many will Greg buy? \_\_\_\_\_

The total cost will be: \_\_\_\_\_

What will Briony buy? \_\_\_\_\_

How many will Briony buy? \_\_\_\_\_

The total cost will be: \_\_\_\_\_

What will Paula buy? \_\_\_\_\_

How many will Paula buy? \_\_\_\_\_

The total cost will be: \_\_\_\_\_

What will Eliana buy? \_\_\_\_\_

How many will Eliana buy? \_\_\_\_\_

The total cost will be: \_\_\_\_\_

What will Darren buy? \_\_\_\_\_

How many will Darren buy? \_\_\_\_\_

The total cost will be: \_\_\_\_\_

What will Darius buy? \_\_\_\_\_

How many will Darius buy? \_\_\_\_\_

The total cost will be: \_\_\_\_\_