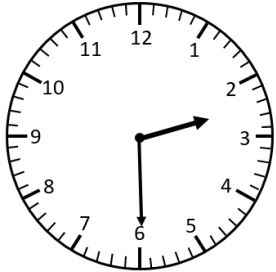


# Analogue, Digital and Written

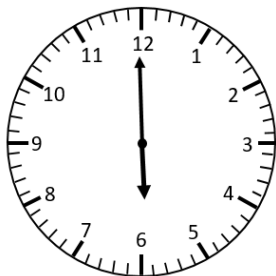
## O'clock and Half Past

Draw lines to connect the matching times.



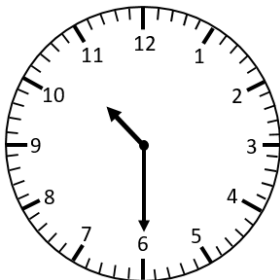
1:00

half past  
ten



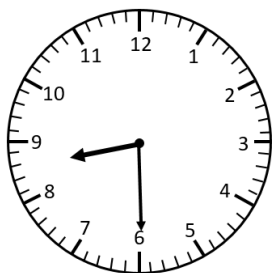
2:30

one  
o'clock



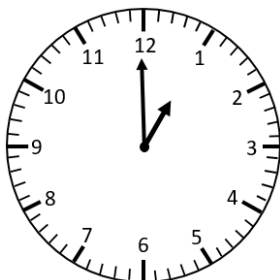
8:30

half past  
two



10:30

half past  
eight



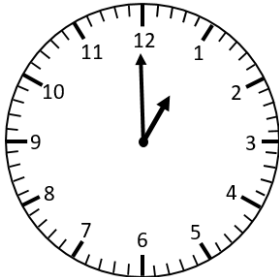
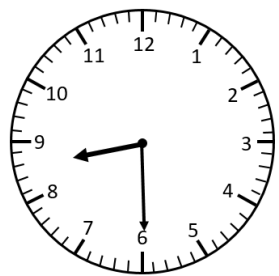
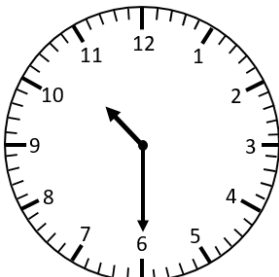
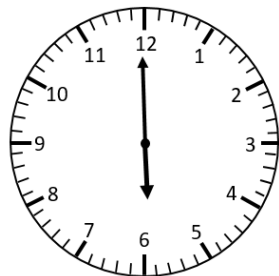
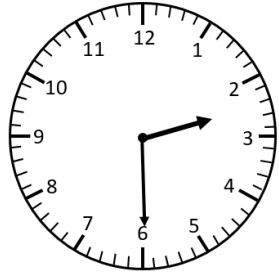
6:00

six o'clock

# Analogue, Digital and Written

## O'clock and Half Past **Answers**

Draw lines to connect the matching times.



1:00

2:30

8:30

10:30

6:00

half past  
ten

one  
o'clock

half past  
two

half past  
eight

six o'clock