
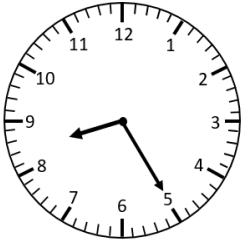



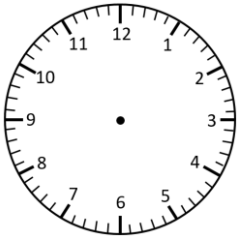
# Representing Time- Words, Analogue, Digital

## 5 Minute Intervals

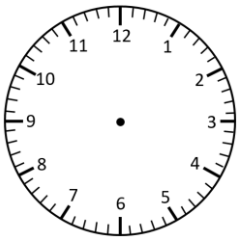
Read the times and represent in **analogue** and **digital** forms.




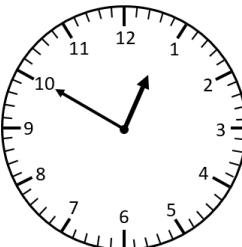
---



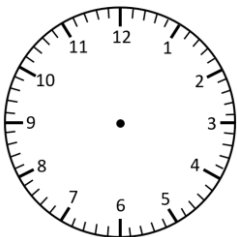
---




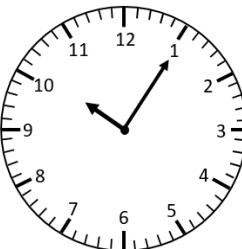
quarter to 7



---



---

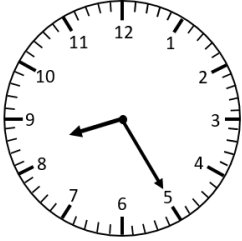


---

# Representing Time- Words, Analogue, Digital

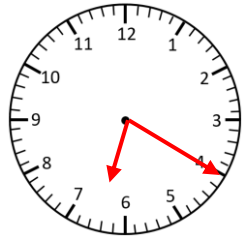
## 5 Minute Intervals **Answers**

Read the times and represent in **analogue** and **digital** forms.



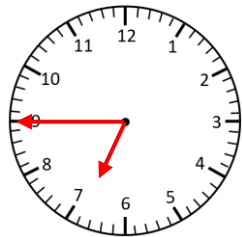
**8:25**

twenty-five past 8



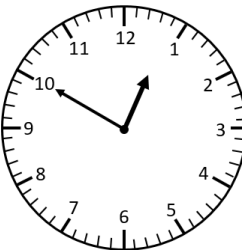
**6:20**

twenty past 6



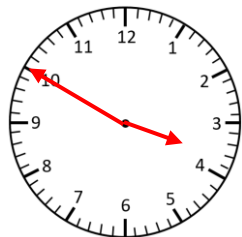
**6:45**

quarter to 7



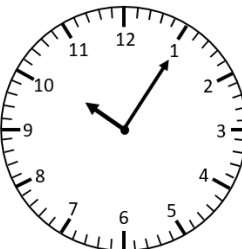
**12:50**

ten to 1



**3:50**

ten to 4



**10:05**

five past 10