
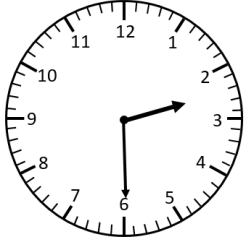



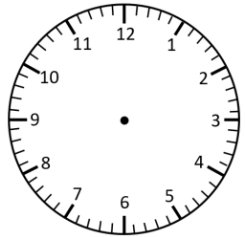
# Representing Time- Words, Analogue, Digital

Quarter past, Quarter to

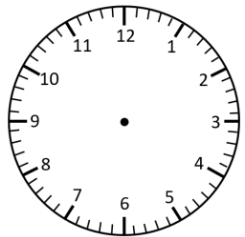
Read the times and represent in **analogue** and **digital** forms.




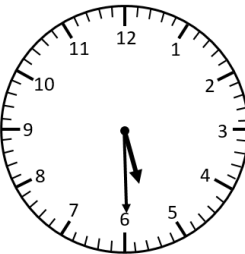
---




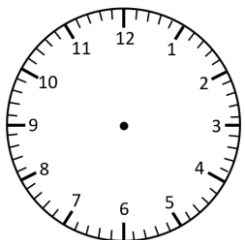
---




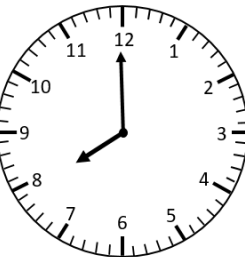
half past 4



---



---

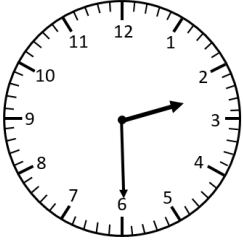


---

# Representing Time- Words, Analogue, Digital

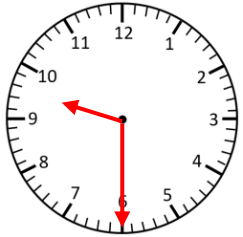
Quarter past, Quarter to **Answers**

Read the times and represent in **analogue** and **digital** forms.



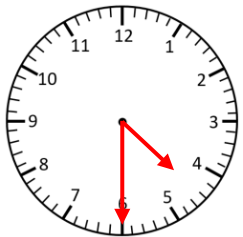
**2:30**

half past 2



**9:30**

half past 9



**4:30**

half past 4



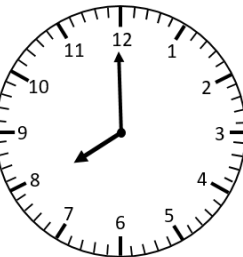
**5:30**

half past 5



**7:00**

seven o'clock



**8:00**

eight o'clock