
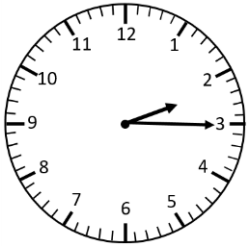
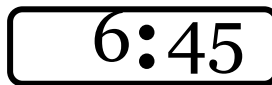
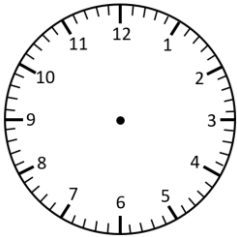



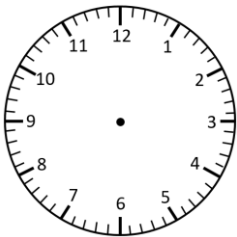
Representing Time- Words, Analogue, Digital

Quarter past, Quarter to


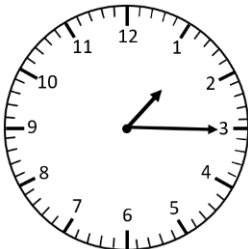
Read the times and represent in **analogue** and **digital** forms.


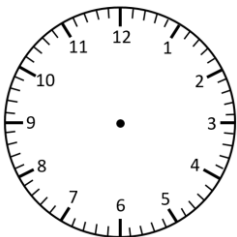



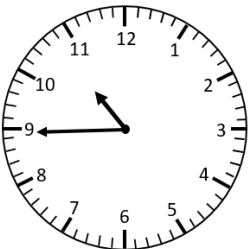




quarter to 2



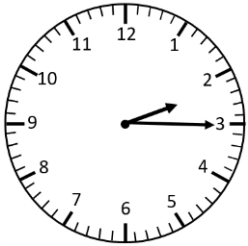




Representing Time- Words, Analogue, Digital

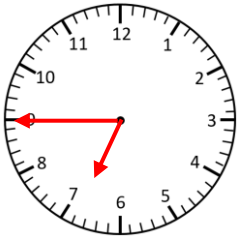
Quarter past, Quarter to **Answers**

Read the times and represent in **analogue** and **digital** forms.



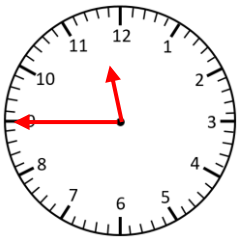
2:15

quarter past 2



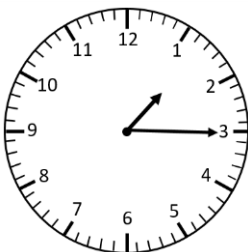
6:45

quarter to 7



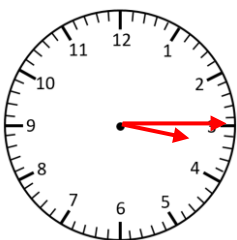
11:45

quarter to 2



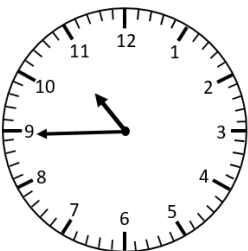
1:15

quarter past 1



3:15

quarter past 3



10:45

quarter to 11