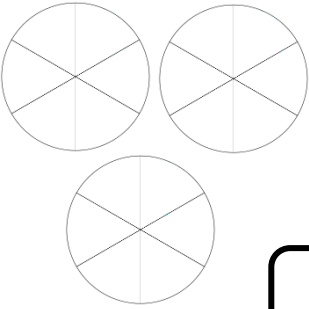
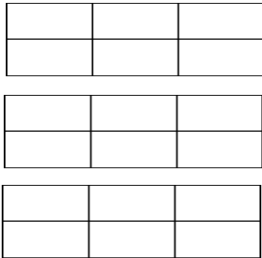
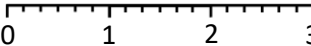
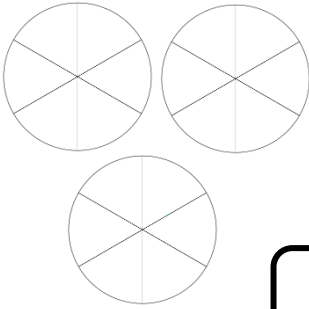
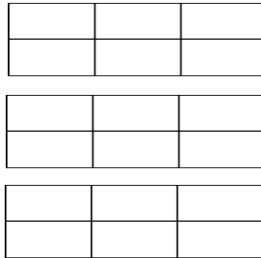
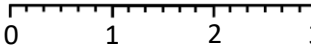
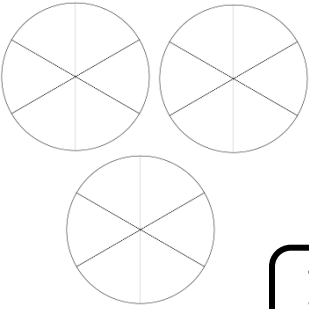
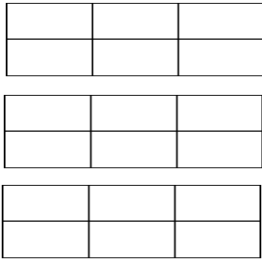
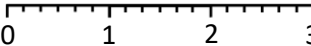


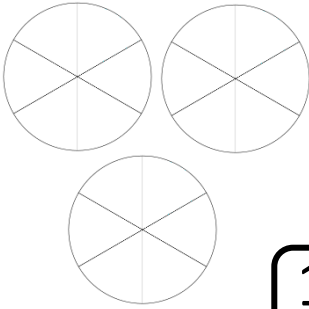
# Representing Sixths

Represent the given fraction in different ways.

<u>Fraction Circles</u>	<u>Words</u>
	<p><u>Mixed Number</u></p>
<div style="border: 1px solid black; border-radius: 15px; padding: 5px; display: inline-block;"> <math>\frac{4}{6}</math> </div>	
	

<u>Fraction Circles</u>	<u>Words</u>
	<p><u>Mixed Number</u></p>
<div style="border: 1px solid black; border-radius: 15px; padding: 5px; display: inline-block;"> <math>\frac{8}{6}</math> </div>	
	

<u>Fraction Circles</u>	<u>Words</u>
	<p><u>Mixed Number</u></p>
<div style="border: 1px solid black; border-radius: 15px; padding: 5px; display: inline-block;"> <math>\frac{16}{6}</math> </div>	
	

<u>Fraction Circles</u>	<u>Words</u>
	<p><u>Mixed Number</u></p>
<div style="border: 1px solid black; border-radius: 15px; padding: 5px; display: inline-block;"> <math>\frac{11}{6}</math> </div>	
