
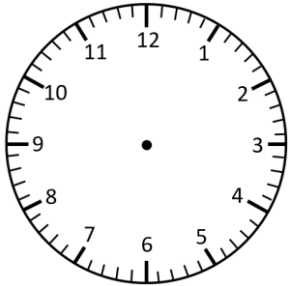


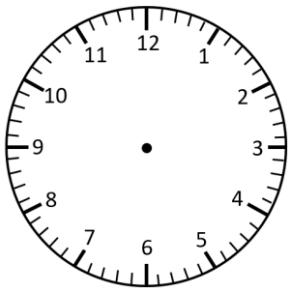
Representing Time- Analogue, Digital

1 Minute Intervals

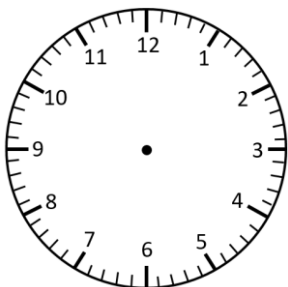
Read the times and represent in **analogue** and **digital** forms.




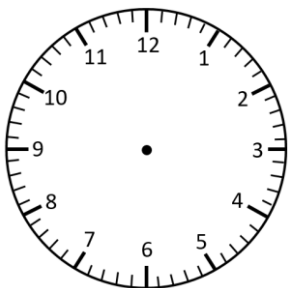
sixteen to 2




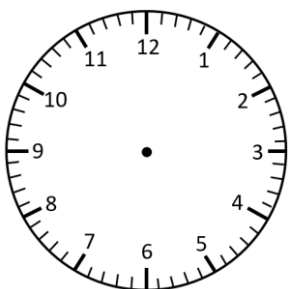
twenty-three past 4



3 minutes to 9



twelve past 11

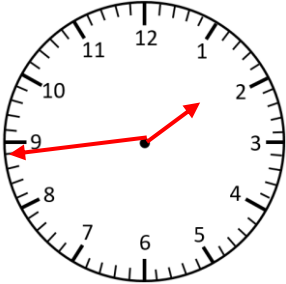


twenty-two to 6

Representing Time- Analogue, Digital

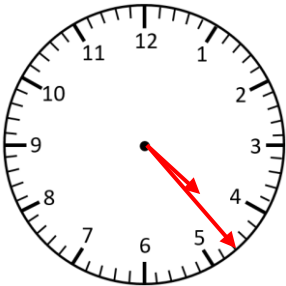
1 Minute Intervals **Answers**

Read the times and represent in **analogue** and **digital** forms.



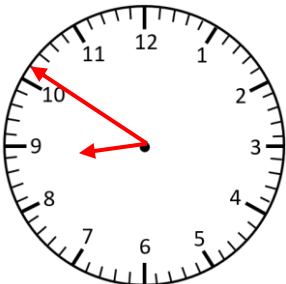
1:44

sixteen to 2



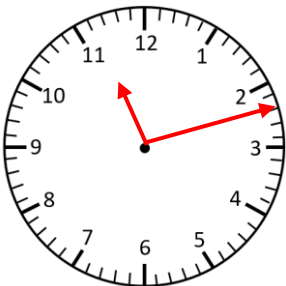
4:23

twenty-three past 4



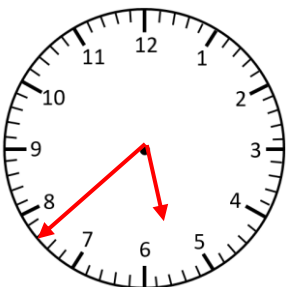
8:51

3 minutes to 9



11:12

twelve past 11



5:38

twenty-two to 6