
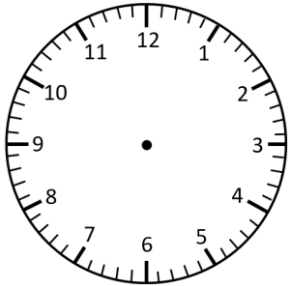



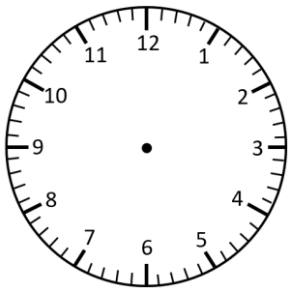
# Representing Time- Analogue, Digital

## 1 Minute Intervals

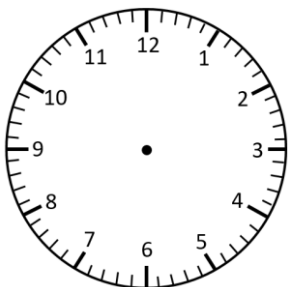
Read the times and represent in **analogue** and **digital** forms.



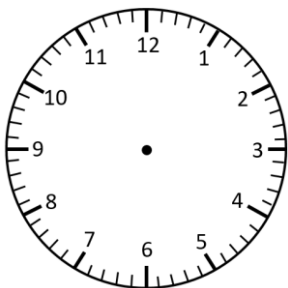
thirteen to 8




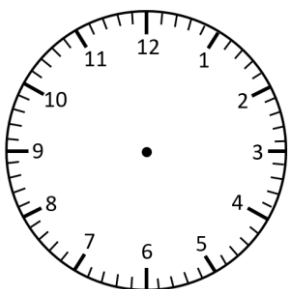
nineteen past 12



eleven minutes to 5



four minutes past 5

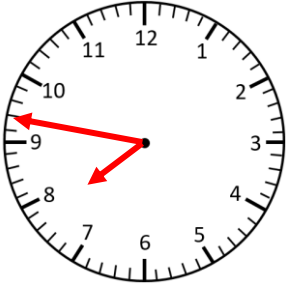


eight to 4

# Representing Time- Analogue, Digital **Answers**

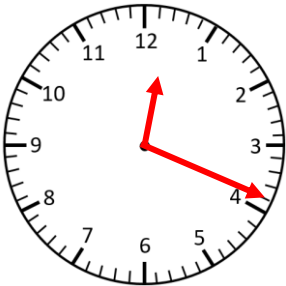
## 1 Minute Intervals

Read the times and represent in **analogue** and **digital** forms.



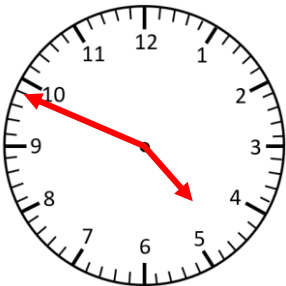
**7:47**

thirteen to 8



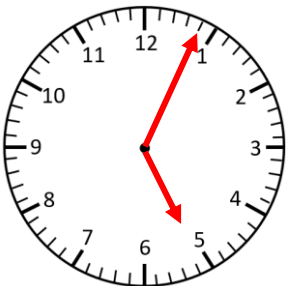
**12:19**

nineteen past 12



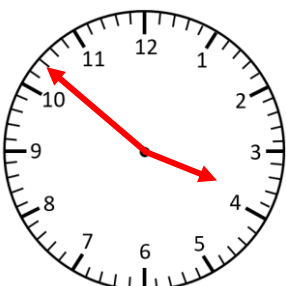
**4:49**

eleven minutes to 5



**5:04**

four minutes past 5



**3:52**

eight to 4