
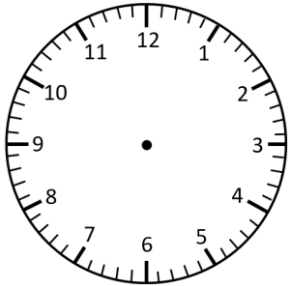


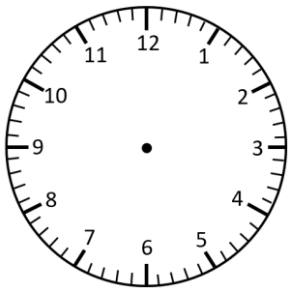
Representing Time- Analogue, Digital

5 Minute Intervals

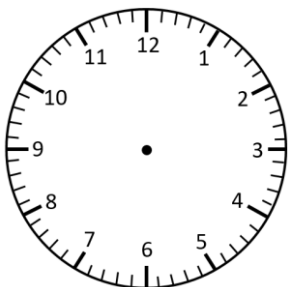
Read the times and represent in **analogue** and **digital** forms.




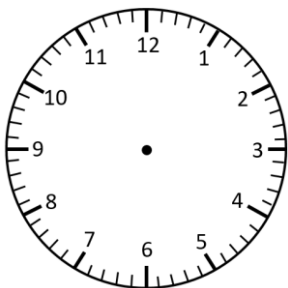
twenty-five past 3




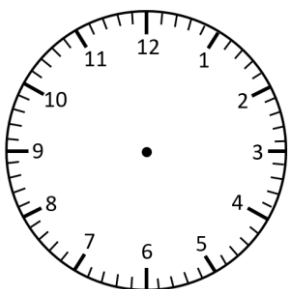
ten to 7



five past 9



twenty past 12

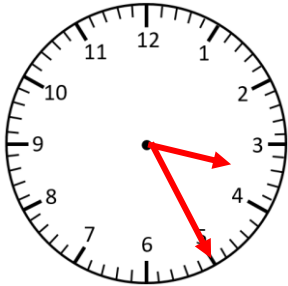


five to 8

Representing Time- Analogue, Digital **Answers**

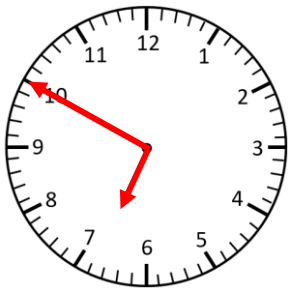
5 Minute Intervals

Read the times and represent in **analogue** and **digital** forms.



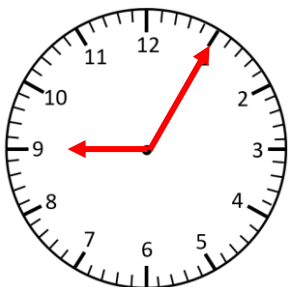
3:25

twenty-five past 3



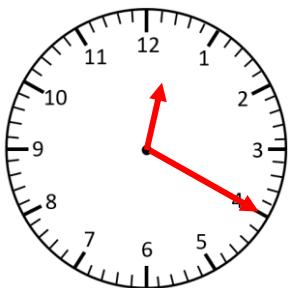
6:50

ten to 7



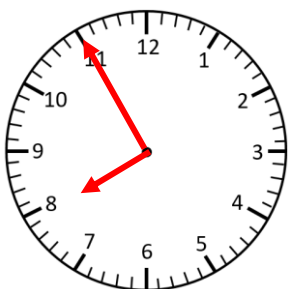
9:05

five past 9



12:20

twenty past 12



7:55

five to 8