
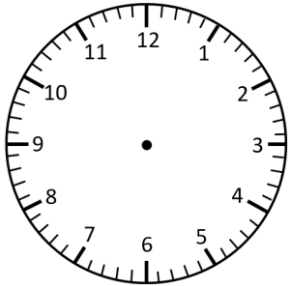


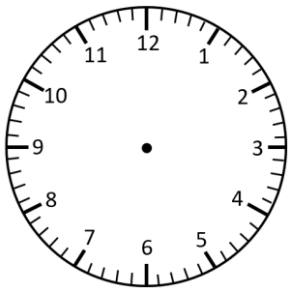
Representing Time- Analogue, Digital

5 Minute Intervals

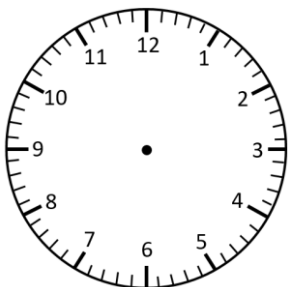
Read the times and represent in **analogue** and **digital** forms.




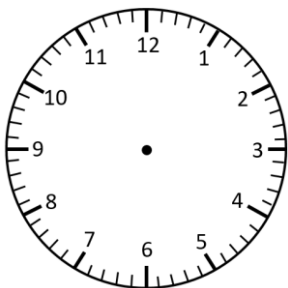
twenty to 3




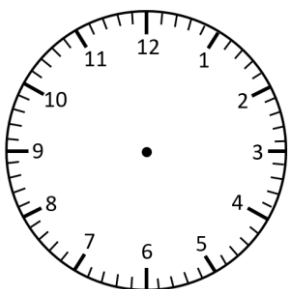
ten past 10



twenty-five to 8



ten to 6

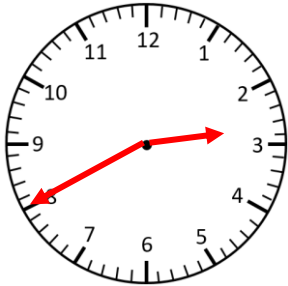


five past 10

Representing Time- Analogue, Digital **Answers**

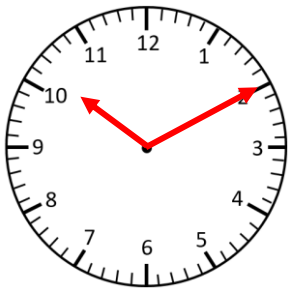
5 Minute Intervals

Read the times and represent in **analogue** and **digital** forms.



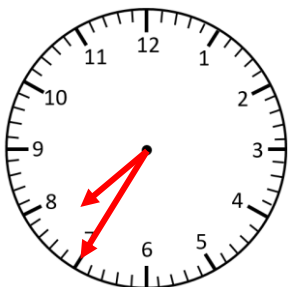
2:40

twenty to 3



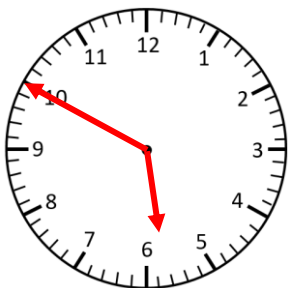
10:10

ten past 10



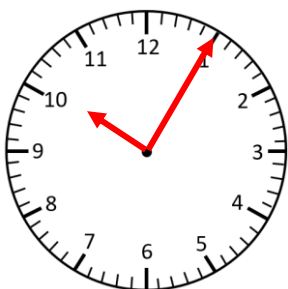
7:35

twenty-five to 8



5:50

ten to 6



10:05

five past 10