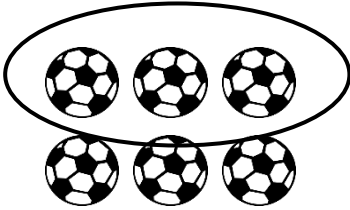
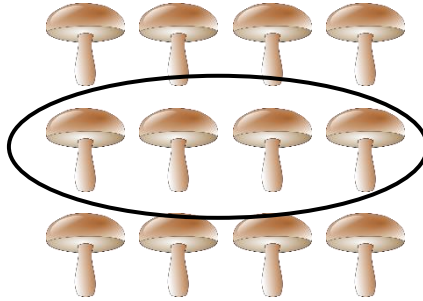


Fractions of a Collection

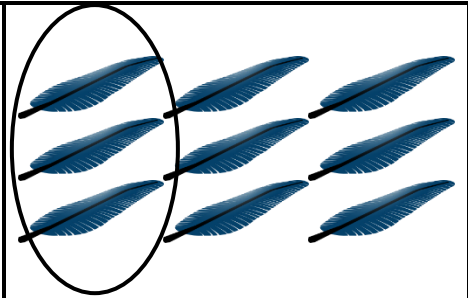
Circle the fraction to match and complete the equations.



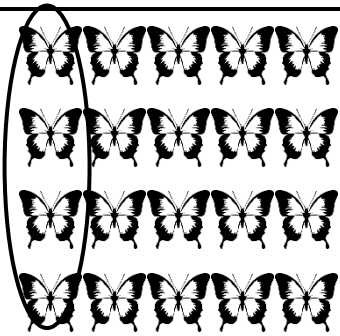
$$\frac{1}{2} \text{ of } 6 =$$




$$\frac{1}{3} \text{ of } 12 =$$



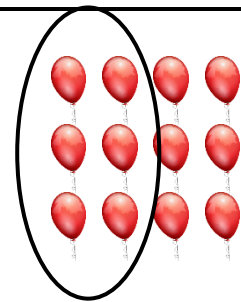
$$\frac{1}{3} \text{ of } 9 =$$




$$\frac{1}{5} \text{ of } 20 =$$




$$\frac{1}{4} \text{ of } 8 =$$



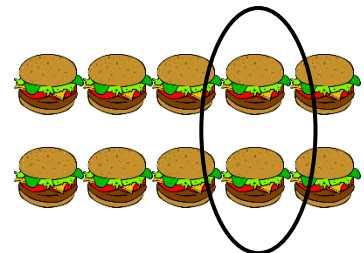
$$\frac{1}{2} \text{ of } 12 =$$



$$\frac{1}{3} \text{ of } 6 =$$



$$\frac{1}{5} \text{ of } 15 =$$



$$\frac{1}{5} \text{ of } 10 =$$

Use your answers above to help you solve the following:



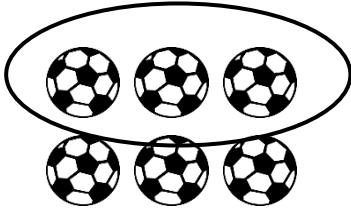
$$\frac{2}{3} \text{ of } 6 =$$



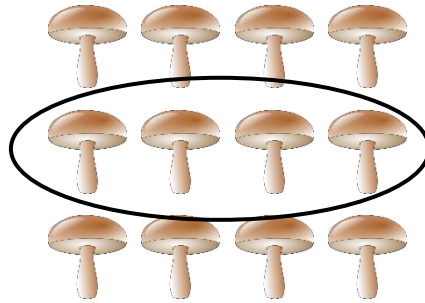
$$\frac{3}{4} \text{ of } 8 =$$

Fractions of a Collection **Answers**

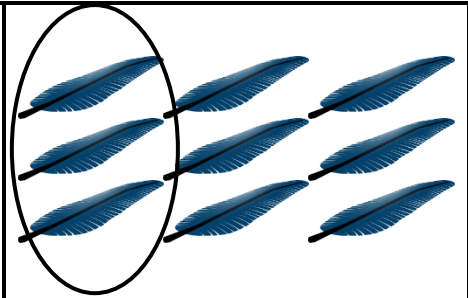
Circle the fraction to match and complete the equations.



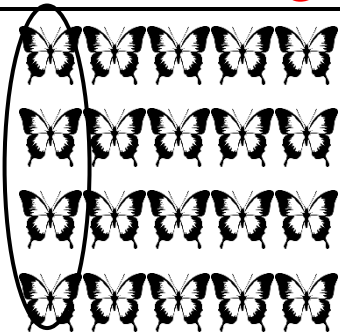
$$\frac{1}{2} \text{ of } 6 = 3$$




$$\frac{1}{3} \text{ of } 12 = 4$$



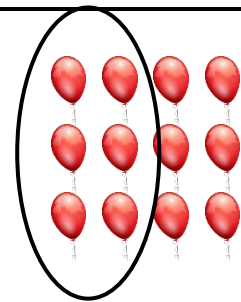
$$\frac{1}{3} \text{ of } 9 = 3$$




$$\frac{1}{5} \text{ of } 20 = 4$$




$$\frac{1}{4} \text{ of } 8 = 2$$



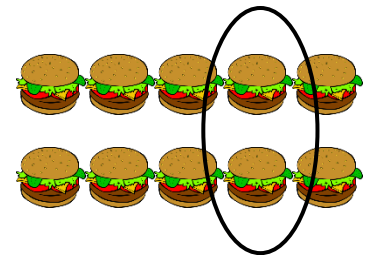
$$\frac{1}{2} \text{ of } 12 = 6$$



$$\frac{1}{3} \text{ of } 6 = 2$$



$$\frac{1}{5} \text{ of } 15 = 3$$



$$\frac{1}{5} \text{ of } 10 = 2$$

Use your answers above to help you solve the following:



$$\frac{2}{3} \text{ of } 6 = 4$$



$$\frac{3}{4} \text{ of } 8 = 6$$