

Equivalent or Not?

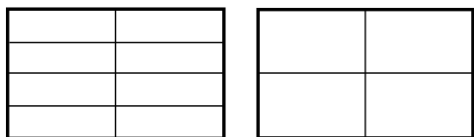
=

Equivalent

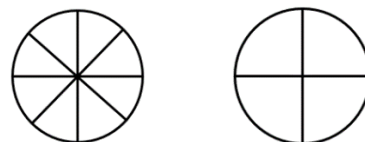
≠

Equivalent

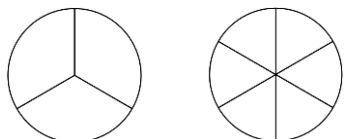
Show whether the fraction pairs are equivalent or not equivalent using the symbols above.
Shade the shapes to help you.



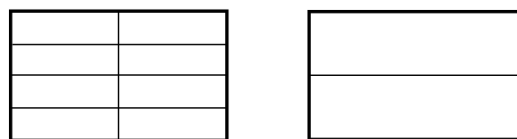
$$\frac{3}{8} \quad \square \quad \frac{1}{4}$$



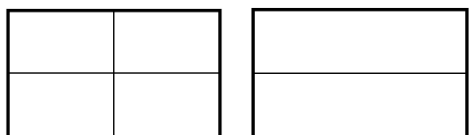
$$\frac{6}{8} \quad \square \quad \frac{3}{4}$$



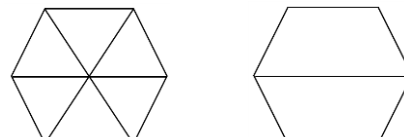
$$\frac{3}{6} \quad \square \quad \frac{2}{3}$$



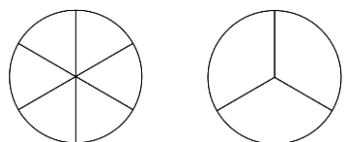
$$\frac{4}{8} \quad \square \quad \frac{1}{2}$$



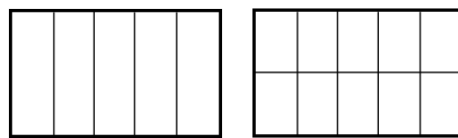
$$\frac{3}{4} \quad \square \quad \frac{1}{2}$$



$$\frac{2}{6} \quad \square \quad \frac{1}{2}$$



$$\frac{2}{6} \quad \square \quad \frac{1}{3}$$



$$\frac{3}{5} \quad \square \quad \frac{5}{10}$$

Equivalent or Not? Answers

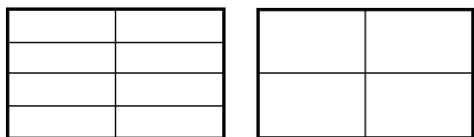
=

Equivalent

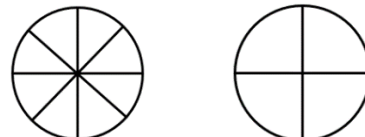
≠

Equivalent

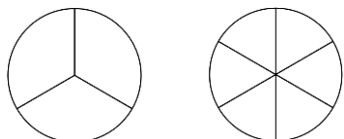
Show whether the fraction pairs are equivalent or not equivalent using the symbols above. Shade the shapes to help you.



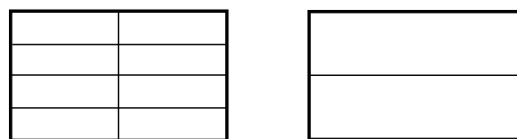
$$\frac{3}{8} \quad \neq \quad \frac{1}{4}$$



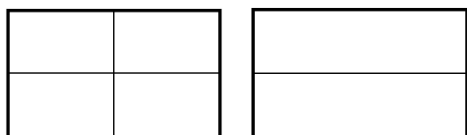
$$\frac{6}{8} \quad = \quad \frac{3}{4}$$



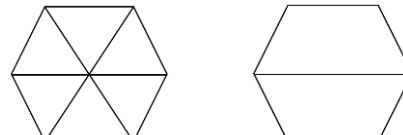
$$\frac{3}{6} \quad \neq \quad \frac{2}{3}$$



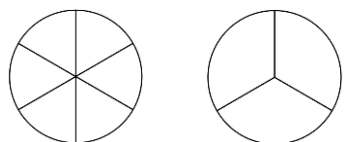
$$\frac{4}{8} \quad = \quad \frac{1}{2}$$



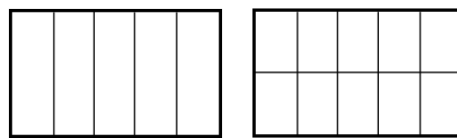
$$\frac{3}{4} \quad \neq \quad \frac{1}{2}$$



$$\frac{2}{6} \quad \neq \quad \frac{1}{2}$$



$$\frac{2}{6} \quad = \quad \frac{1}{3}$$



$$\frac{3}{5} \quad \neq \quad \frac{5}{10}$$