

Representing Fractions

5 halves



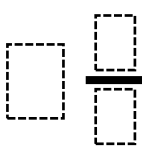
Show on a number line



Improper fraction



Mixed number



_____ thirds



Show on a number line



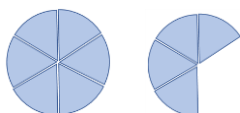
Improper fraction




Mixed number



_____ sixths



Show on a number line



Improper fraction




Mixed number



_____ quarters



Show on a number line



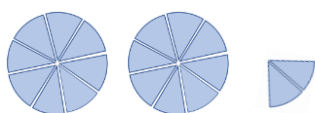
Improper fraction




Mixed number



_____ eighths



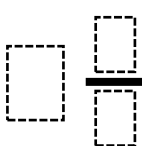
Show on a number line



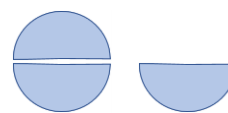
Improper fraction




Mixed number



_____ halves



Show on a number line



Improper fraction



Mixed number




Representing Fractions Answers

5 halves



Show on a number line



Improper fraction

$5/2$

Mixed number

$2 \frac{1}{2}$

5 thirds



Show on a number line



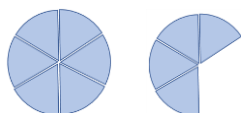
Improper fraction

$5/3$

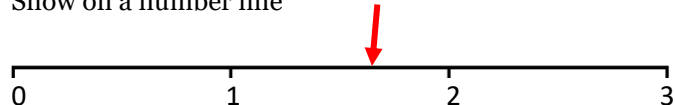
Mixed number

$1 \frac{2}{3}$

10 sixths



Show on a number line



Improper fraction

$10/6$

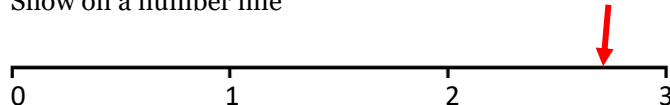
Mixed number

$1 \frac{4}{6}$

11 quarters



Show on a number line



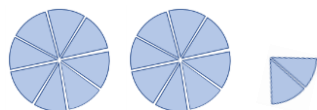
Improper fraction

$11/4$


Mixed number

$2 \frac{3}{4}$

18 eighths



Show on a number line



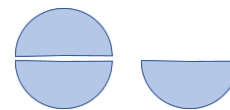
Improper fraction

$18/8$

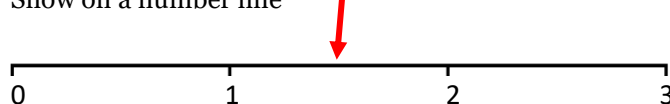
Mixed number

$2 \frac{2}{8}$

3 halves



Show on a number line



Improper fraction

$3/2$

Mixed number

$1 \frac{1}{2}$