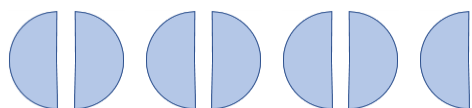
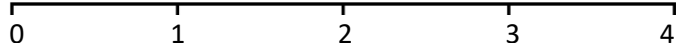


Representing Fractions

7 halves



Show on a number line



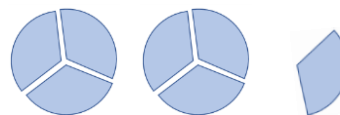
Improper fraction

$$\frac{\square}{\square}$$

Mixed number

$$\square \frac{\square}{\square}$$

_____ thirds



Show on a number line



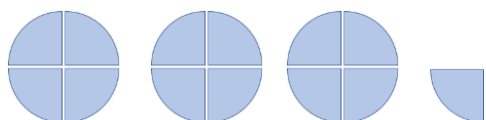
Improper fraction

$$\frac{\square}{\square}$$

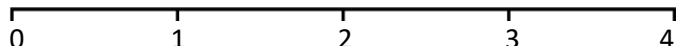
Mixed number

$$\square \frac{\square}{\square}$$

_____ quarters



Show on a number line



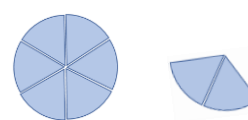
Improper fraction

$$\frac{\square}{\square}$$


Mixed number

$$\square \frac{\square}{\square}$$

_____ sixths



Show on a number line



Improper fraction

$$\frac{\square}{\square}$$


Mixed number

$$\square \frac{\square}{\square}$$

_____ thirds



Show on a number line



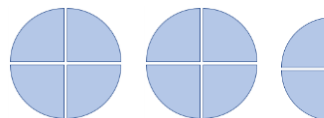
Improper fraction

$$\frac{\square}{\square}$$


Mixed number

$$\square \frac{\square}{\square}$$

_____ quarters



Show on a number line



Improper fraction

$$\frac{\square}{\square}$$

Mixed number

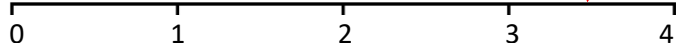
$$\square \frac{\square}{\square}$$

Representing Fractions Answers

7 halves



Show on a number line



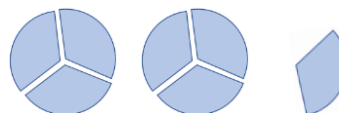
Improper fraction

$7/2$

Mixed number

$3 \frac{1}{2}$

_____ thirds



Show on a number line



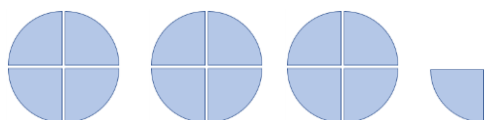
Improper fraction

$7/3$

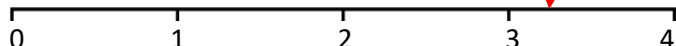
Mixed number

$2 \frac{1}{3}$

_____ quarters



Show on a number line



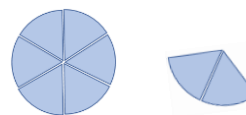
Improper fraction

$13/4$


Mixed number

$3 \frac{1}{4}$

_____ sixths



Show on a number line



Improper fraction

$8/6$


Mixed number

$1 \frac{2}{6}$

_____ thirds



Show on a number line



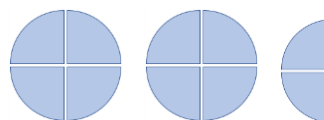
Improper fraction

$4/3$


Mixed number

$1 \frac{1}{3}$

_____ quarters



Show on a number line



Improper fraction

$10/4$

Mixed number

$2 \frac{2}{4}$