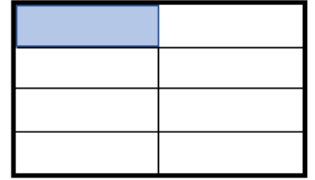


## Fractions

Draw lines to connect the symbol, word and picture form.

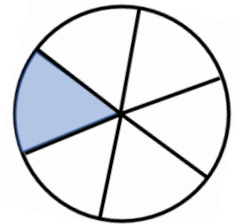
$$\frac{1}{2}$$

one quarter



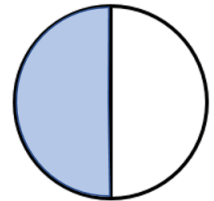
$$\frac{1}{4}$$

one eighth



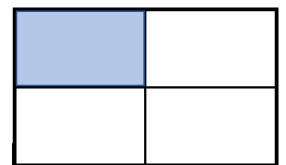
$$\frac{1}{3}$$

one sixth



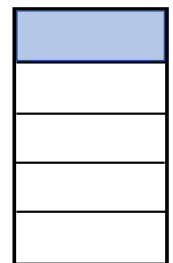
$$\frac{1}{5}$$

one half



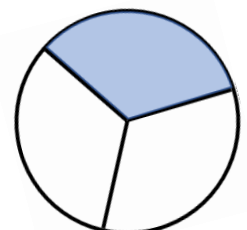
$$\frac{1}{6}$$

one third



$$\frac{1}{8}$$

one fifth

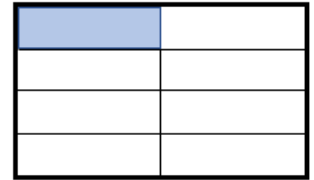


# Fractions **Answers**

Draw lines to connect the symbol, word and picture form.

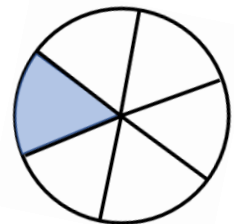
$\frac{1}{2}$

one quarter



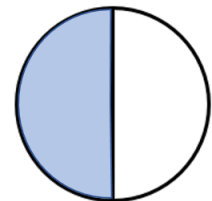
$\frac{1}{4}$

one eighth



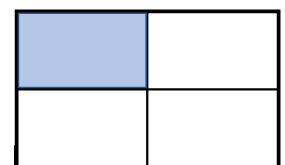
$\frac{1}{3}$

one sixth



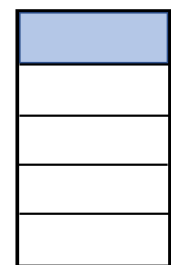
$\frac{1}{5}$

one half



$\frac{1}{6}$

one third



$\frac{1}{8}$

one fifth

