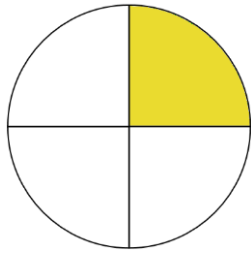


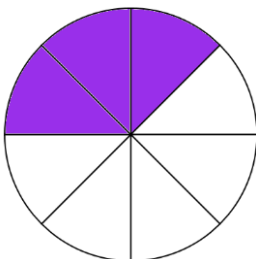
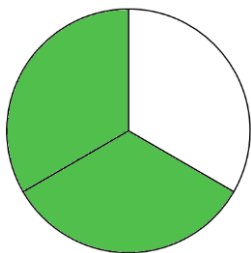

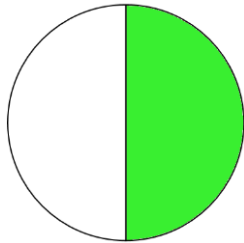
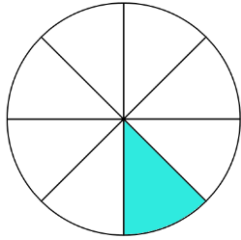
Representing Fractions [1]

Write the fraction in words and digits. The first one has been done.



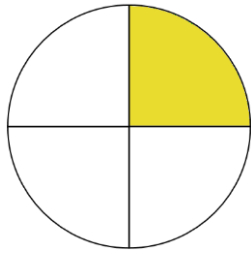
$$\frac{1}{4}$$

one quarter



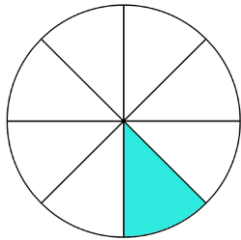
Representing Fractions [1] Answers

Write the fraction in words and digits. The first one has been done.



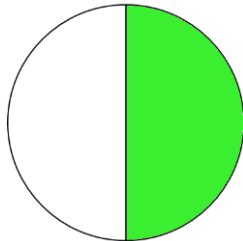
$\frac{1}{4}$

one quarter




$\frac{1}{8}$

one eighth



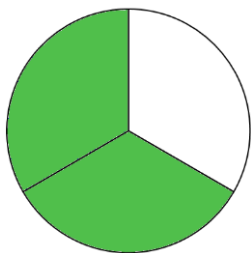
$\frac{1}{2}$

one half



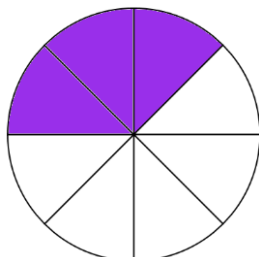
$\frac{2}{4}$

two quarters



$\frac{2}{3}$

two thirds



$\frac{3}{8}$

three eighths