




Representing Fractions [3]

Write the fraction in words and digits. The first one has been done.




$$\frac{1}{4}$$

one quarter



Representing Fractions [3] Answers

Write the fraction in words and digits. The first one has been done.




$\frac{1}{4}$

one quarter



$\frac{1}{3}$

one third




$\frac{1}{8}$

one eighth



$\frac{2}{3}$

two thirds



$\frac{3}{4}$

three quarters



$\frac{1}{2}$

one half