

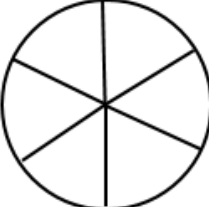

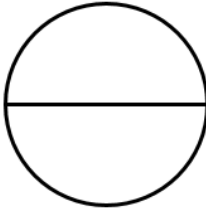
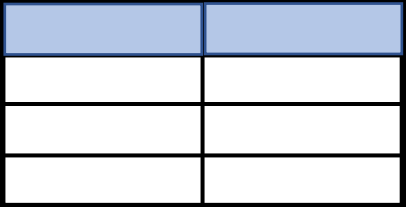
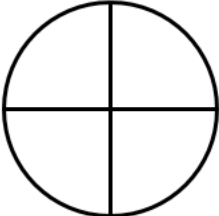


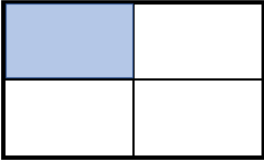

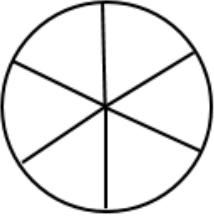


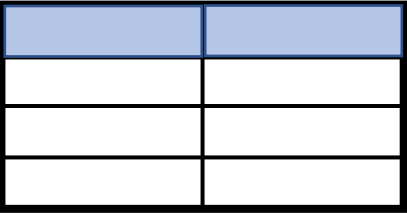
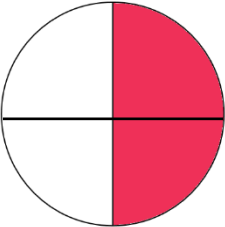
Representing Fractions

Fill in the missing spaces.

Shape	Symbol	Words
	<hr data-bbox="740 479 863 488"/>	<hr data-bbox="1066 524 1469 533"/>
	<hr data-bbox="740 725 863 734"/>	two thirds
	$\frac{3}{6}$	<hr data-bbox="1066 1016 1469 1025"/>
	<hr data-bbox="740 1218 863 1227"/>	one fifth
	$\frac{1}{2}$	<hr data-bbox="1066 1514 1469 1523"/>
	<hr data-bbox="740 1720 863 1729"/>	<hr data-bbox="1066 1765 1469 1774"/>
	<hr data-bbox="740 1966 863 1975"/>	two quarters

Representing Fractions **Answers**

Fill in the missing spaces.

Shape	Symbol	Words
	$\frac{1}{4}$	one quarter
	$\frac{2}{3}$	two thirds
	$\frac{3}{6}$	three sixths
	$\frac{1}{5}$	one fifth
	$\frac{1}{2}$	one half
	$\frac{2}{8}$	two eighths
	$\frac{2}{4}$	two quarters