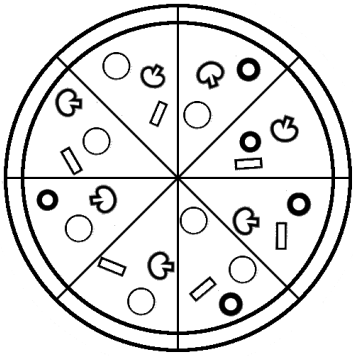


# Sharing Pizzas

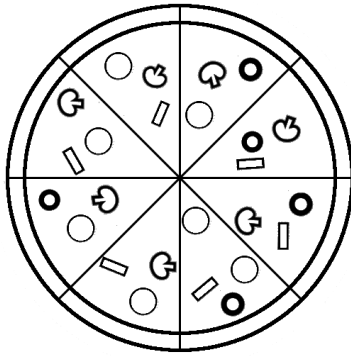
## Unlike Fractions

Colour the pizza that has been eaten then work out how much pizza is left.



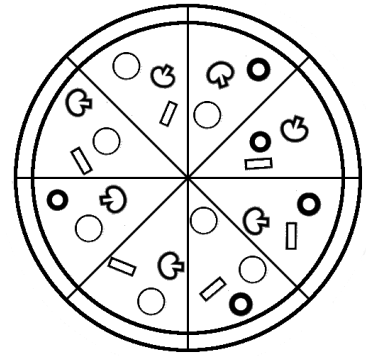
Karl ate  $\frac{2}{8}$  Tim ate  $\frac{1}{4}$

What fraction of pizza is left?



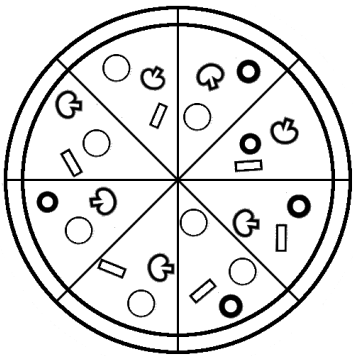
Lenny ate  $\frac{3}{8}$  Carol ate  $\frac{1}{4}$

What fraction of pizza is left?



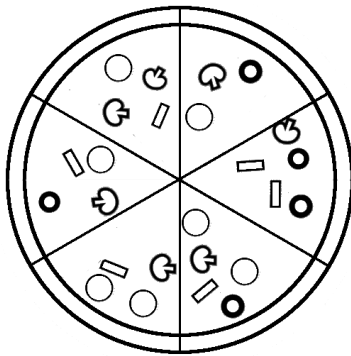
Deb ate  $\frac{2}{8}$  Kelli ate  $\frac{1}{2}$

What fraction of pizza is left?



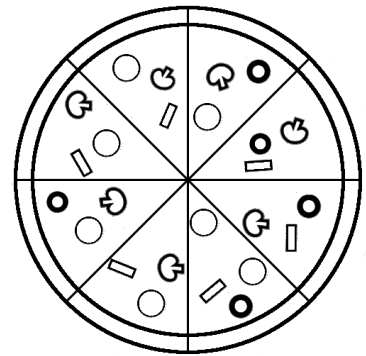
Trent ate  $\frac{3}{4}$  Leea ate  $\frac{2}{8}$

What fraction of pizza is left?



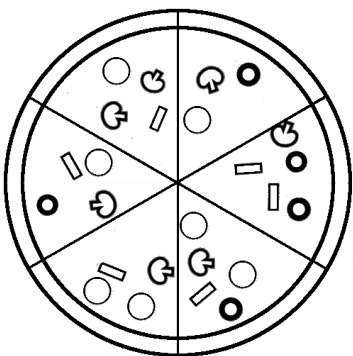
Jez ate  $\frac{2}{6}$  Mark ate  $\frac{1}{6}$

What fraction of pizza is left?



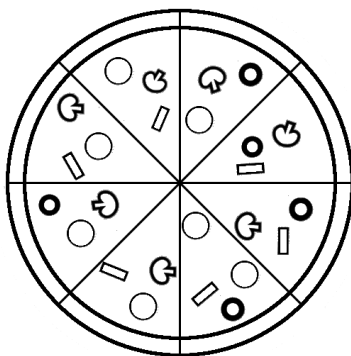
Ben ate  $\frac{3}{4}$  Jen ate  $\frac{1}{8}$

What fraction of pizza is left?



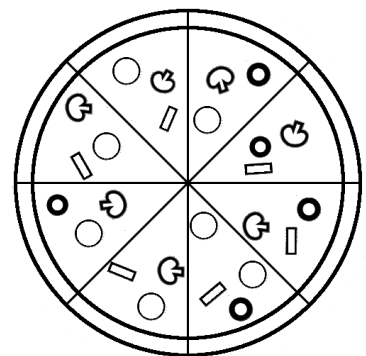
Yin ate  $\frac{1}{3}$  Carol ate  $\frac{3}{6}$

What fraction of pizza is left?



Phil ate  $\frac{2}{8}$  Tiff ate  $\frac{1}{4}$  Ang ate  $\frac{1}{8}$

What fraction of pizza is left?



Nat ate  $\frac{1}{8}$  Paul ate  $\frac{1}{2}$  Liz ate  $\frac{1}{8}$

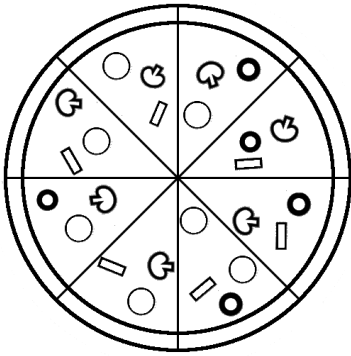
What fraction of pizza is left?



# Sharing Pizzas **Answers**

## Unlike Fractions

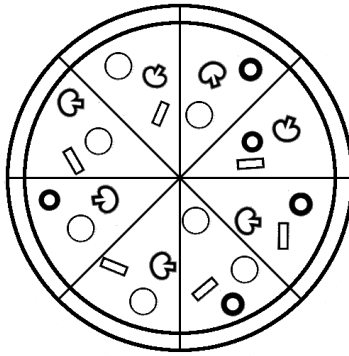
Colour the pizza that has been eaten then work out how much pizza is left.



Karl ate  $\frac{2}{8}$  Tim ate  $\frac{1}{4}$

What fraction of pizza is left?

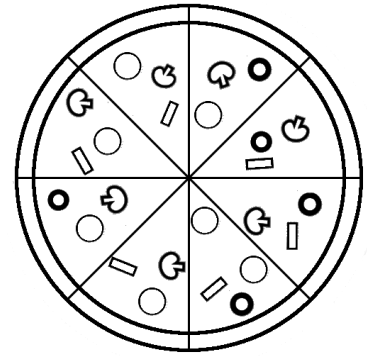
$\frac{1}{2}$  ( $\frac{4}{8}$ ) ( $\frac{2}{4}$ )



Lenny ate  $\frac{3}{8}$  Carol ate  $\frac{1}{4}$

What fraction of pizza is left?

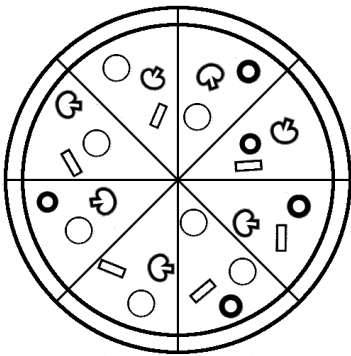
$\frac{3}{8}$



Deb ate  $\frac{2}{8}$  Kelli ate  $\frac{1}{2}$

What fraction of pizza is left?

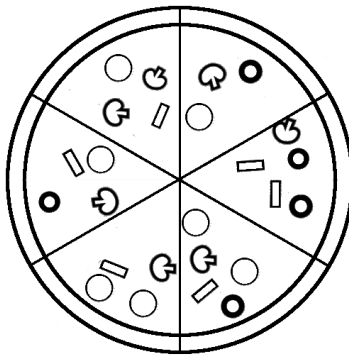
$\frac{1}{4}$  ( $\frac{2}{8}$ )



Trent ate  $\frac{3}{4}$  Leea ate  $\frac{2}{8}$

What fraction of pizza is left?

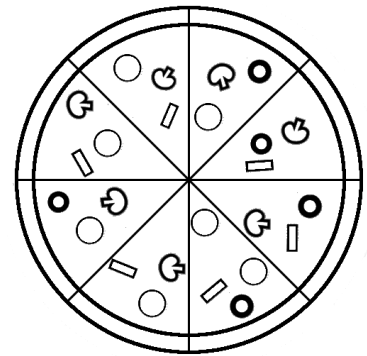
0



Jez ate  $\frac{2}{6}$  Mark ate  $\frac{1}{6}$

What fraction of pizza is left?

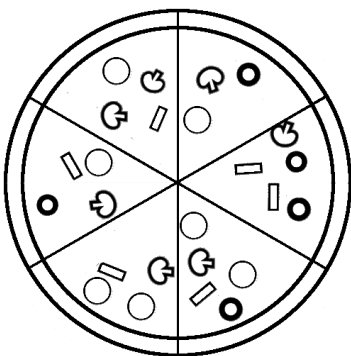
$\frac{1}{2}$  ( $\frac{3}{6}$ )



Ben ate  $\frac{3}{4}$  Jen ate  $\frac{1}{8}$

What fraction of pizza is left?

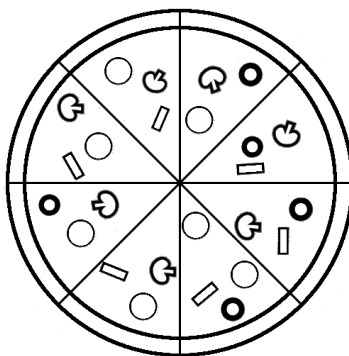
$\frac{1}{8}$



Yin ate  $\frac{1}{3}$  Carol ate  $\frac{3}{6}$

What fraction of pizza is left?

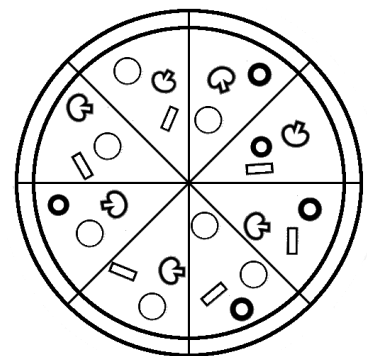
$\frac{1}{6}$



Phil ate  $\frac{2}{8}$  Tiff ate  $\frac{1}{4}$  Ang ate  $\frac{1}{8}$

What fraction of pizza is left?

$\frac{3}{8}$



Nat ate  $\frac{1}{8}$  Paul ate  $\frac{1}{2}$  Liz ate  $\frac{1}{8}$

What fraction of pizza is left?

$\frac{1}{4}$  ( $\frac{2}{8}$ )