


# Dolphin Cove



Allan is visiting Dolphin Cove. Use the map, compass & legend to answer the questions.

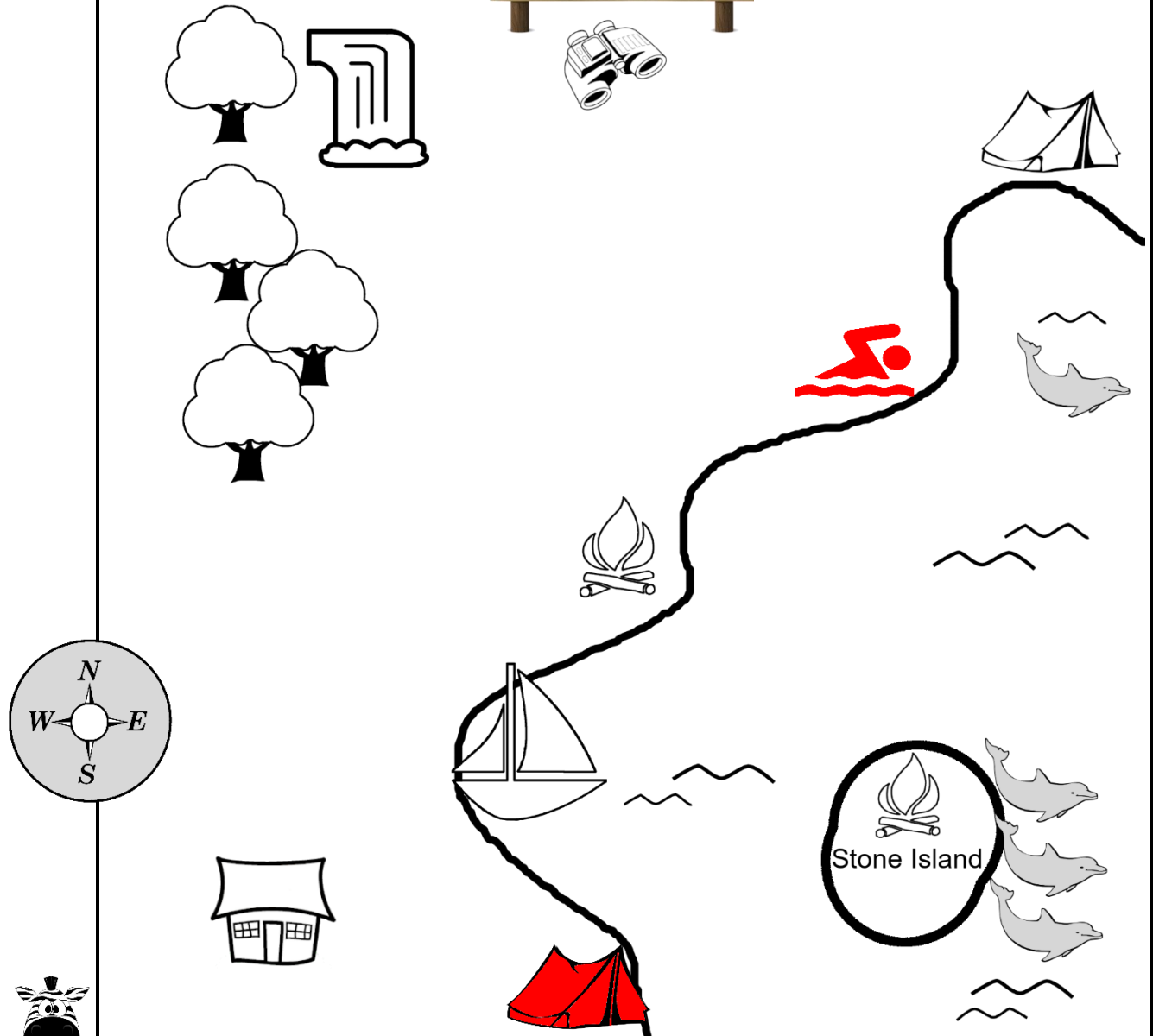
- Use directions (north, south, east, west) to complete the sentences:  
 The ranger's cabin is \_\_\_\_\_ of the forest.  
 Dolphin watching is on the \_\_\_\_\_ side of Stone Island.  
 The lookout is \_\_\_\_\_ of the boat hire.
- If Allan walks **west** from the lookout, which two places could he be going?  
 \_\_\_\_\_
- Allan is staying at a camp spot **south** of the forest. Colour his camp spot red.
- Allan walked **north** from a campfire area and found a swimming spot **east** of the forest. Draw a symbol for the legend and draw it on the map.
- Colour the map to show the water and the land.

### Legend

	Forest
	Waterfall
	Dolphin watching
	Boat hire
	Lookout
	Camp spot
	Campfire area
	Ranger's Cabin

# Answers

## Dolphin Cove



Allan is visiting Dolphin Cove. Use the map, compass & legend to answer the questions.

1. Use directions (north, south, east, west) to complete the sentences:

The ranger's cabin is **south** of the forest.










Dolphin watching is on the **east** side of Stone Island.

The lookout is **north** of the boat hire.

2. If Allan walks **west** from the lookout, which two places could he be going?

**waterfall forest**

3. Allan is staying at a camp spot **south** of the forest. Colour his camp spot red.
4. Allan walked **north** from a campfire area and found a swimming spot **east** of the forest. Draw a symbol for the legend and draw it on the map.
5. Colour the map to show the water and the land.

Legend	
	Forest
	Waterfall
	Dolphin watching
	Boat hire
	Lookout
	Camp spot
	Campfire area
	Ranger's Cabin
	Swimming spot