











Pirate Map

Key:

 sharks	 cannon	 pier	 flag	 Mount Dobby
 treasure chest	 pirate ship	 forest	 waterfall	 village



Use the **KEY** and the **INSTRUCTIONS** to finish the pirate map!

Draw a **waterfall** at H4.

Draw **cannons** at D8 and F9.

Draw a **village** at D4 and D5.

Draw a **pirate flag** at E8.

Show there are **sharks** at A6.

Draw a **treasure chest** at D10.

Draw a **pirate ship** at G2.

Draw a route from the pirate ship to the treasure chest!



Challenge!

What can be found at these coordinates?

B7 _____

G6 _____

E4 _____