




## Counting On

Count on to find the totals.

7

+

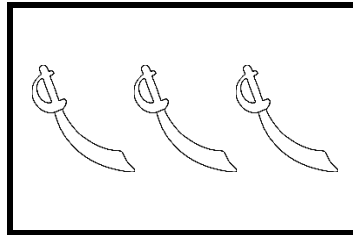


=

\_\_\_\_\_

4

+

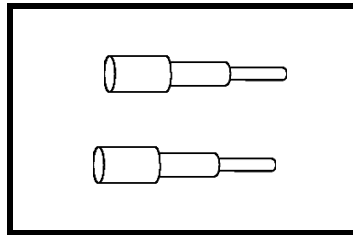


=

\_\_\_\_\_

8

+




=

\_\_\_\_\_

9

+

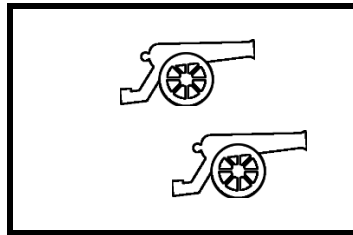


=

\_\_\_\_\_

5

+



=

\_\_\_\_\_

Draw your own objects to match!

6

+



=

8



# Counting On **Answers**

Count on to find the totals.

$$7 + \boxed{\text{1 pirate hat}} = 8$$

$$4 + \boxed{\text{3 cutlasses}} = 7$$

$$8 + \boxed{\text{2 cannons}} = 10$$

$$9 + \boxed{\text{3 pirate ships}} = 12$$

$$5 + \boxed{\text{2 cannons}} = 7$$

Draw your own objects to match!

$$6 + \boxed{\text{2 objects}} = 8$$