

# Forces

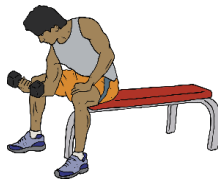
## Push or Pull?

A force is a push or a pull on an object. When the direction of the force is towards the object applying the force, it is a pull force. When the direction of force is away from the object applying the force, it is a push force.

Show whether the following are examples of push forces, pull forces or both.



push pull both




push pull both



push pull both



push pull both



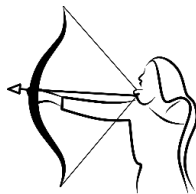
push pull both



push pull both



push pull both



push pull both



push pull both



push pull both



push pull both



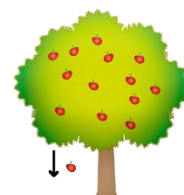
push pull both



push pull both



push pull both



push pull both