



Design a House!


You are an architect and have been asked to design a house for the Bluth Family.




- Bathroom 1
9 square metres
- Bathroom 2
4 square metres
- Kitchen
15 square metres
- Garage
20 square metres



- Master bedroom
20 square metres
- Media room
22 square metres
- Lounge room
24 square metres
- Dining room
15 square metres



- Bedroom
9 square metres



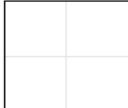
- Games room
10 square metres
- Bedroom
9 square metres

Each square represents 1 square metre.



Label each room and write the area.

For example:

Bathroom 1	
$A = 9 \text{ m}^2$	

Challenge:

Calculate the perimeter of 4 of the rooms in the house!