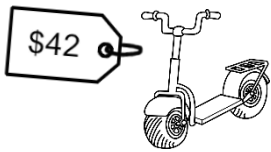



Money


Adding Amounts & Calculating Change (Whole Dollar)



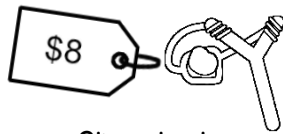
Scooter



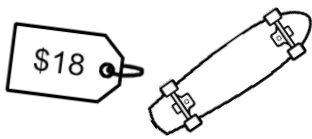
Rocking Horse



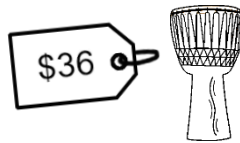
Teddy



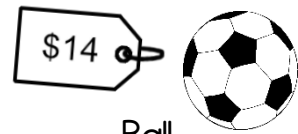
Slingshot



Skateboard



Drum



Ball

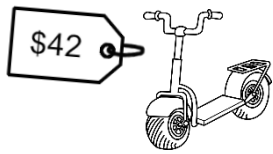
Help the shoppers work out how much change they will receive.

Purchase	Total Cost	Amount Tendered	Change (show working)
Arnie wants to buy a drum and a slingshot .		<input type="text" value="\$50"/>	
Mr Downing wants to buy <u>three</u> balls .		<input type="text" value="\$20"/> <input type="text" value="\$20"/> <input type="text" value="\$20"/>	
Abbey wants to buy a skateboard and a teddy .		<input type="text" value="\$20"/> <input type="text" value="\$20"/>	
Brad wants to buy a scooter and <u>two</u> slingshots .		<input type="text" value="\$50"/> <input type="text" value="\$20"/>	

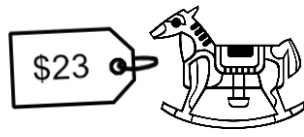
Dee has \$29 . Can she buy a ball and a skateboard? How much more does she need?	
--	--

Money Answers


Adding Amounts & Calculating Change (Whole Dollar)



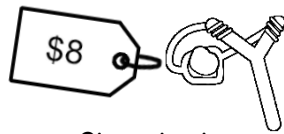
Scooter



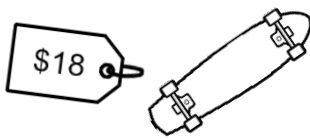
Rocking Horse



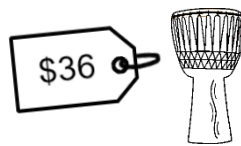
Teddy



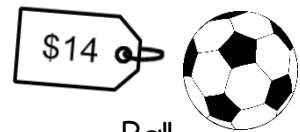
Slingshot



Skateboard



Drum



Ball

Help the shoppers work out how much change they will receive.

Purchase	Total Cost	Amount Tendered	Change (show working)
Arnie wants to buy a drum and a slingshot .	\$44	\$50	\$6
Mr Downing wants to buy <u>three</u> balls .	\$42	\$20 \$20 \$20	\$18
Abbey wants to buy a skateboard and a teddy .	\$29	\$20 \$20	\$11
Brad wants to buy a scooter and <u>two</u> slingshots .	\$58	\$50 \$20	\$12

Dee has \$29.
Can she buy a ball and a skateboard? How much more does she need?