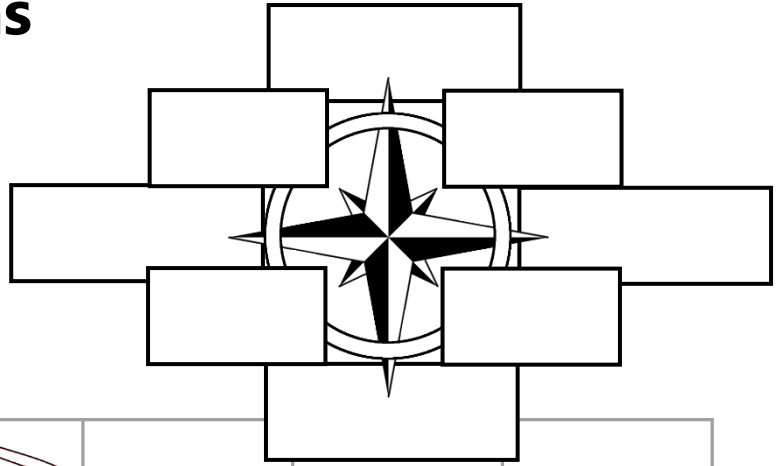

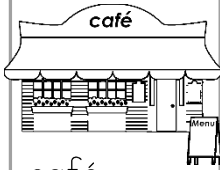








Describing Locations

Label the compass rose.



		 house		
	 café			 bike
 tree		 car		
	 birds	 school		 bus

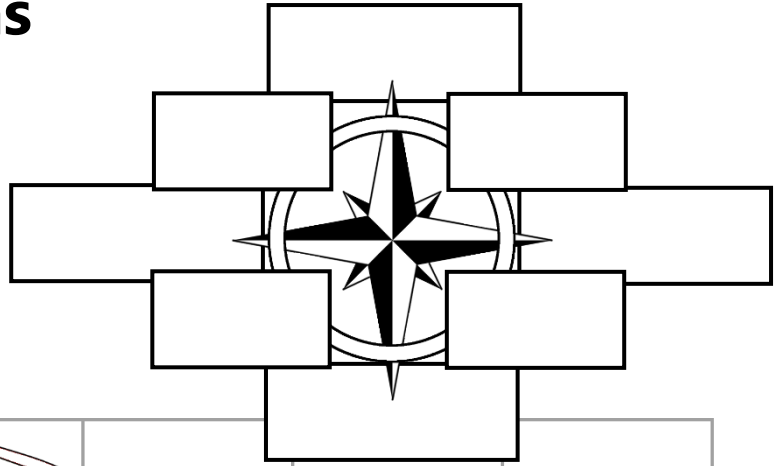
Complete the statements using the compass rose to help.


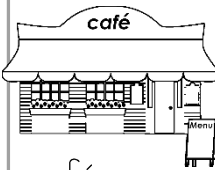






- The birds are _____ of the school.
- The house is _____ of the car.
- The bike is _____ of the school.
- The bus is _____ of the house.
- The café is _____ of the house.
- The café is _____ of the bus.
- The _____ is north of the birds.
- The _____ is south-east of the café.
- The _____ is north-west of the car.
- Sam walks from the house to the café and then to school. Describe his journey.

Describing Locations

Answers

Label the compass rose.



		 house		
	 café			 bike
 tree		 car		
	 birds		 school	 bus

Complete the statements using the compass rose to help.

- The birds are **west** of the school.
- The house is **north** of the car.
- The bike is **north-east** of the school.
- The bus is **south-east** of the house.
- The café is **south-west** of the house.
- The café is **north-west** of the bus.
- The **café** is north of the birds.
- The **car/school** is south-east of the café.
- The **café** is north-west of the car.
- Sam walks from the house to the café and then to school. Describe his journey.
Eg. South-west 1 square to the café, then south-east 2 squares to school.