


Counting Collections of Coins

Count each collection of coins.




						Total: _____

						Total: _____


						Total: _____

Draw coins that total the following amounts:



Counting Collections of Coins **Answers**

Count each collection of coins.



						Total: \$5.35

						Total: \$3.90

						Total: \$7.80

Draw coins that total the following amounts:

