


Dolphin Cove



Allan is visiting Dolphin Cove. Use the map, compass & legend to answer the questions.

- Use directions (north, south, east, west) to complete the sentences:

The ranger's cabin is _____ of the forest.

Dolphin watching is on the _____ side of Stone Island.

The lookout is _____ of the boat hire.

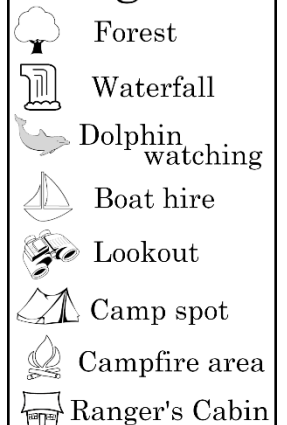
- If Allan walks **west** from the lookout, which two places could he be going?

- Allan is staying at a camp spot **south** of the forest. Colour his camp spot red.

- Allan walked **north** from a campfire area and found a swimming spot **east** of the forest. Draw a symbol for the legend and draw it on the map.


- Colour the map to show the water and the land.

Legend



Answers

Dolphin Cove



Allan is visiting Dolphin Cove. Use the map, compass & legend to answer the questions.

1. Use directions (north, south, east, west) to complete the sentences:

The ranger's cabin is **south** of the forest.

Dolphin watching is on the **east** side of Stone Island.

The lookout is **north** of the boat hire.

2. If Allan walks **west** from the lookout, which two places could he be going?

waterfall forest

3. Allan is staying at a camp spot **south** of the forest. Colour his camp spot red.
4. Allan walked **north** from a campfire area and found a swimming spot **east** of the forest. Draw a symbol for the legend and draw it on the map.
5. Colour the map to show the water and the land.

| Legend | |
|--------|------------------|
| | Forest |
| | Waterfall |
| | Dolphin watching |
| | Boat hire |
| | Lookout |
| | Camp spot |
| | Campfire area |
| | Ranger's Cabin |
| | Swimming spot |

