

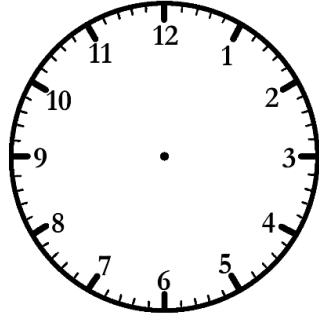



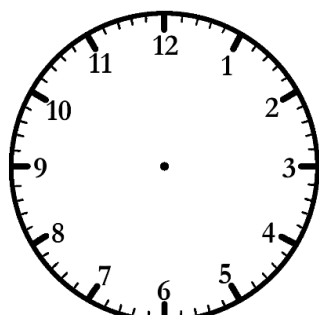
Elapsed Time


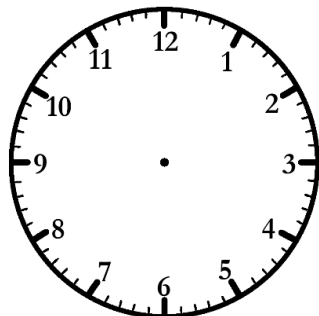
Hour Intervals


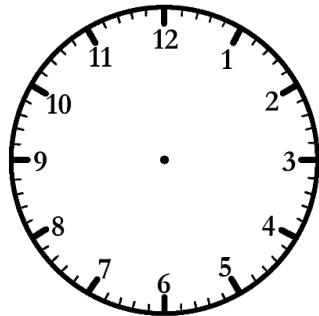
Work out the finish times. Draw the hands and write in digital.



<u>Start Time</u>  ____ : ____	<u>Elapsed time</u> 1 hr ----->	<u>Finish Time</u>  ____ : ____
---	---------------------------------------	--

<u>Start Time</u>  ____ : ____	<u>Elapsed time</u> 3 hrs ----->	<u>Finish Time</u>  ____ : ____
--	--	---


<u>Start Time</u>  ____ : ____	<u>Elapsed time</u> 2 hrs ----->	<u>Finish Time</u>  ____ : ____
---	--	--

<u>Start Time</u>  ____ : ____	<u>Elapsed time</u> 1 hr ----->	<u>Finish Time</u>  ____ : ____
---	---------------------------------------	--

Elapsed Time Answers

Hour Intervals

Work out the finish times. Draw the hands and write in digital.



<p><u>Start Time</u></p> <p>4 : 00</p>	<p><u>Elapsed time</u></p> <p>1 hr</p>	<p><u>Finish Time</u></p> <p>5 : 00</p>
--	--	---

<p><u>Start Time</u></p> <p>11 : 00</p>	<p><u>Elapsed time</u></p> <p>3 hrs</p>	<p><u>Finish Time</u></p> <p>2 : 00</p>
---	---	---

<p><u>Start Time</u></p> <p>5 : 00</p>	<p><u>Elapsed time</u></p> <p>2 hrs</p>	<p><u>Finish Time</u></p> <p>7 : 00</p>
--	---	---

<p><u>Start Time</u></p> <p>2 : 00</p>	<p><u>Elapsed time</u></p> <p>1 hr</p>	<p><u>Finish Time</u></p> <p>3 : 00</p>
--	--	---