

Elapsed Time

30 Minute Intervals

Work out the finish times. Draw the hands and write in digital.



<p><u>Start Time</u></p> <p>___ : ___</p>	<p><u>Elapsed time</u></p> <p>1 hr</p> <p>-----></p>	<p><u>Finish Time</u></p> <p>___ : ___</p>
---	---	--

<p><u>Start Time</u></p> <p>___ : ___</p>	<p><u>Elapsed time</u></p> <p>1 hr</p> <p>-----></p>	<p><u>Finish Time</u></p> <p>___ : ___</p>
---	---	--

<p><u>Start Time</u></p> <p>___ : ___</p>	<p><u>Elapsed time</u></p> <p>30 mins</p> <p>-----></p>	<p><u>Finish Time</u></p> <p>___ : ___</p>
---	--	--

<p><u>Start Time</u></p> <p>___ : ___</p>	<p><u>Elapsed time</u></p> <p>1 hr 30 mins</p> <p>-----></p>	<p><u>Finish Time</u></p> <p>___ : ___</p>
---	---	--

Elapsed Time Answers

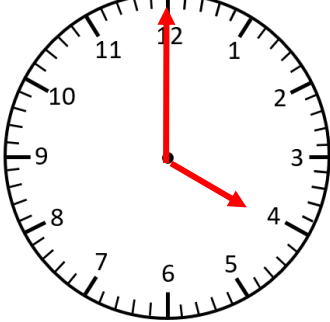

30 Minute Intervals

Work out the finish times. Draw the hands and write in digital.



Start Time Elapsed time Finish Time

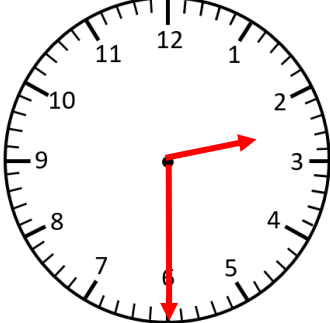
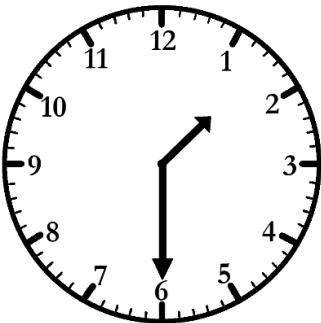
1 hr



3 : 00 -----> 4 : 00

Start Time Elapsed time Finish Time

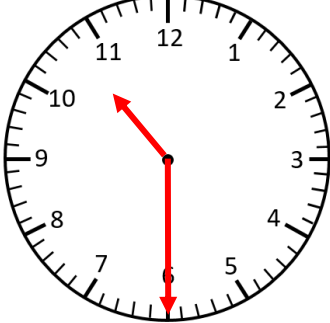

1 hr



1 : 30 -----> 2 : 30

Start Time Elapsed time Finish Time

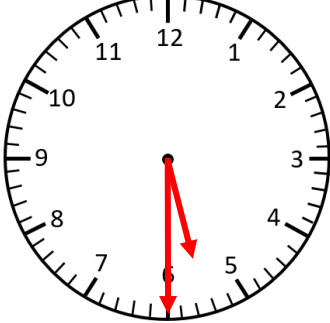

30 mins



10 : 00 -----> 10 : 30

Start Time Elapsed time Finish Time

1 hr 30 mins



4 : 00 -----> 5 : 30