
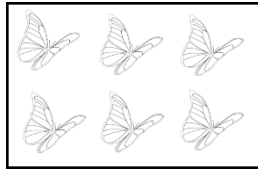


# Addition

Count and add the objects. Write the number sentence below.



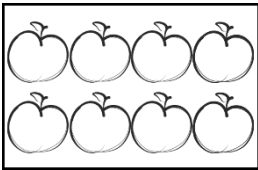
+




=

\_\_\_\_\_

\_\_\_ + \_\_\_ = \_\_\_




+




=

\_\_\_\_\_

\_\_\_ + \_\_\_ = \_\_\_



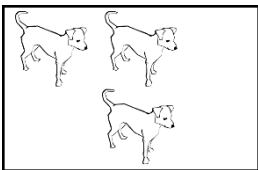
+



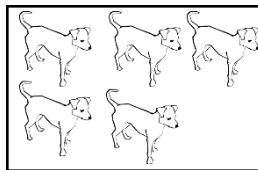
=

\_\_\_\_\_

\_\_\_ + \_\_\_ = \_\_\_




+




=

\_\_\_\_\_

\_\_\_ + \_\_\_ = \_\_\_



+



=

\_\_\_\_\_

\_\_\_ + \_\_\_ = \_\_\_