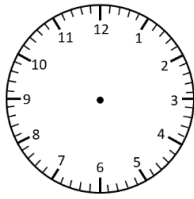


Elapsed Time

15 Minute Intervals

Read the time. Add on the elapsed time and write the new time (in analogue and digital).

Start Time



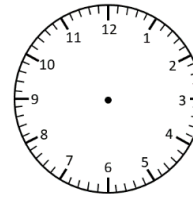
10:30 am

Elapsed Time

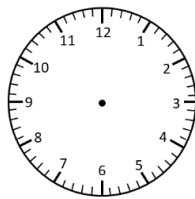
+ 45 minutes



End Time

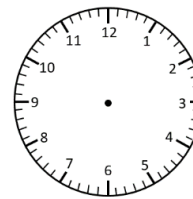


__ : __

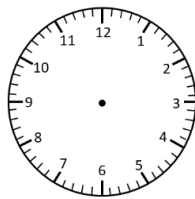


3:15 pm

+ 30 minutes

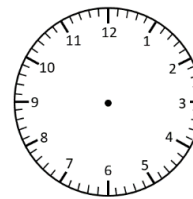


__ : __

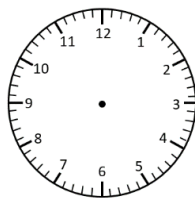


1:45 pm

+ 1 hour

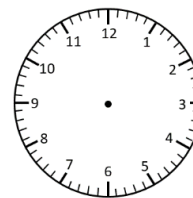


__ : __

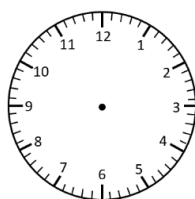


7:45 am

+ 30 minutes

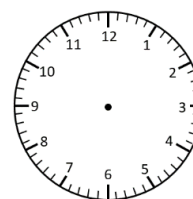


__ : __

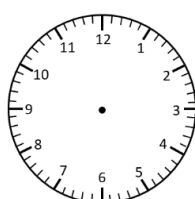


5:30 am

+ 30 minutes

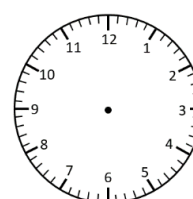


__ : __



6:45 pm

+ 45 minutes



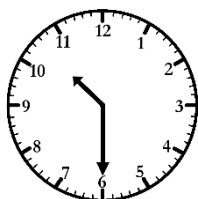
__ : __

Elapsed Time Answers

15 Minute Intervals

Read the time. Add on the elapsed time and write the new time (in analogue and digital).

Start Time



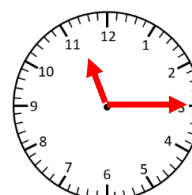
10:30 am

Elapsed Time

+ 45 minutes



End Time

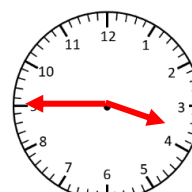


11:15 am




3:15 pm

+ 30 minutes

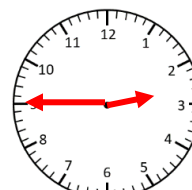


3:45 pm

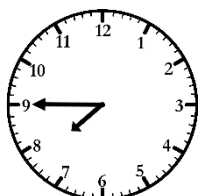


1:45 pm

+ 1 hour

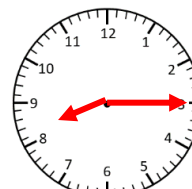


2:45 pm




7:45 am

+ 30 minutes

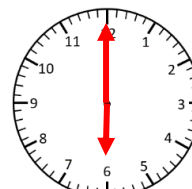


8:15 am




5:30 am

+ 30 minutes

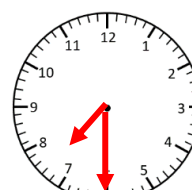


6:00 am



6:45 pm

+ 45 minutes



7:30 pm