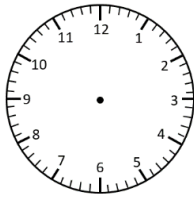


Elapsed Time

15 Minute Intervals

Read the time. Subtract the elapsed time and write the start time (analogue and digital).

Start Time



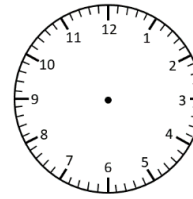
___ : ___

Elapsed Time

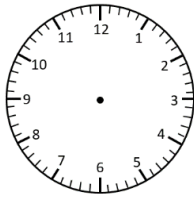
- 30 minutes



End Time

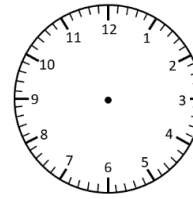


7:30 pm

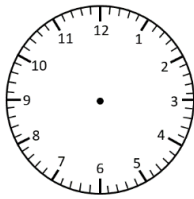


___ : ___

- 45 minutes

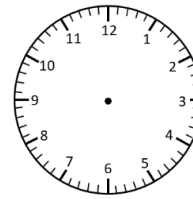


5:15 am

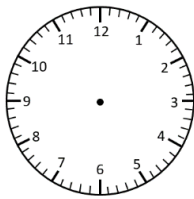


___ : ___

- 15 minutes

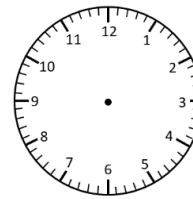


9:45 pm

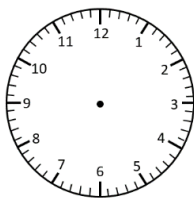


___ : ___

- 45 minutes

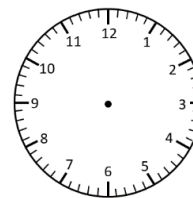


8:00 pm

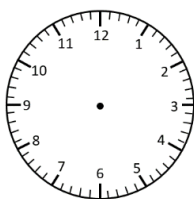


___ : ___

- 30 minutes

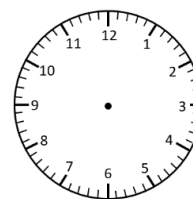


11:45 pm



___ : ___

- 45 minutes



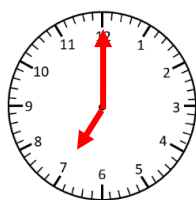
1:30 pm

Elapsed Time Answers

15 Minute Intervals

Read the time. Subtract the elapsed time and write the start time (analogue and digital).

Start Time




7:00pm

Elapsed Time

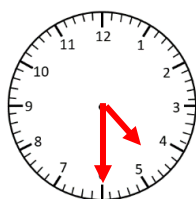
- 30 minutes



End Time

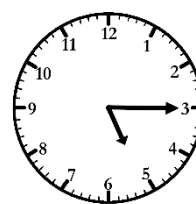


7:30 pm

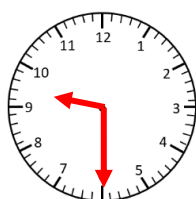


4:30am

- 45 minutes

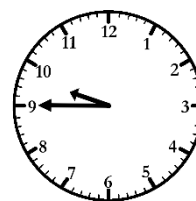


5:15 am

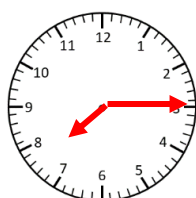


9:30pm

- 15 minutes




9:45 pm

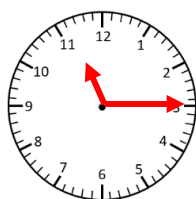


7:15pm

- 45 minutes

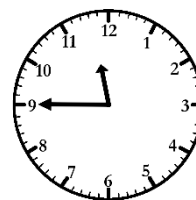


8:00 pm

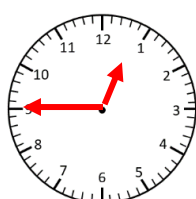


11:15pm

- 30 minutes



11:45 pm



12:45pm

- 45 minutes



1:30 pm