

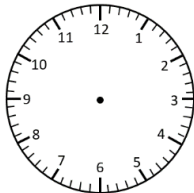
Elapsed Time

Hour Intervals



Read the time. Add on the elapsed time and write the new time (in analogue and digital).

Start Time



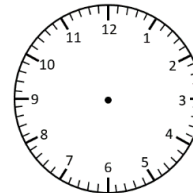
3:00 pm

Elapsed Time

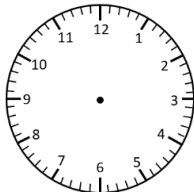
+ 1 hour



End Time

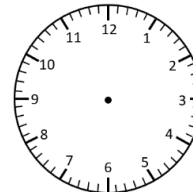


____ : ____

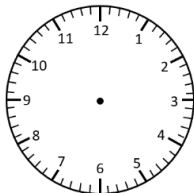


7:00 am

+ 3 hours

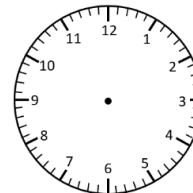


____ : ____

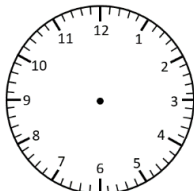


4:00 pm

+ 1 hour

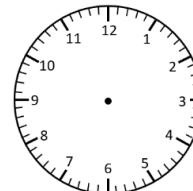


____ : ____

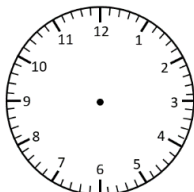


2:00 pm

+ 2 hours

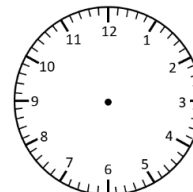


____ : ____

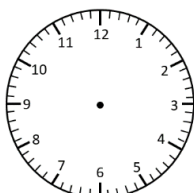


11:00 am

+ 1 hour

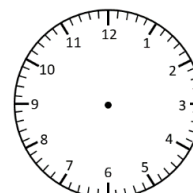


____ : ____



10:00 pm

+ 3 hours



____ : ____



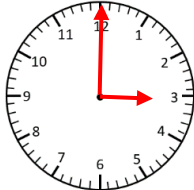
Elapsed Time Answers

Hour Intervals

Read the time. Add on the elapsed time and write the new time (in analogue and digital).



Start Time



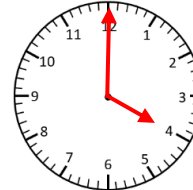
3:00 pm

Elapsed Time

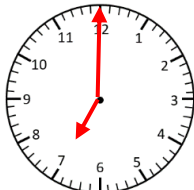
+ 1 hour



End Time

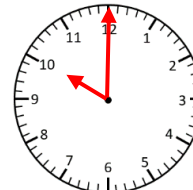


4:00 pm

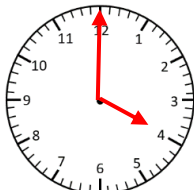


7:00 am

+ 3 hours

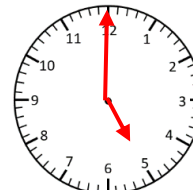


10:00 am

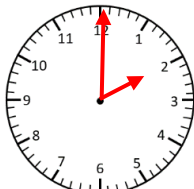


4:00 pm

+ 1 hour



5:00 pm

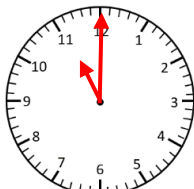


2:00 pm

+ 2 hours

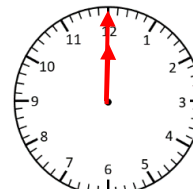


4:00 pm

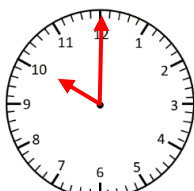


11:00 am

+ 1 hour

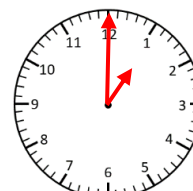


12:00 pm



10:00 pm

+ 3 hours



1:00 am

