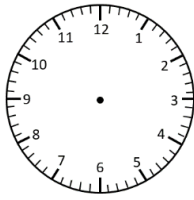


Elapsed Time

Hour Intervals

Read the time. Add or subtract the elapsed time and write the new time.

Start Time



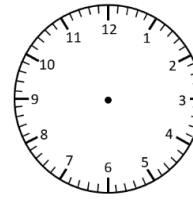
___ : ___

Elapsed Time

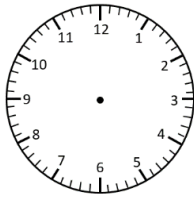
- 2 hours



End Time

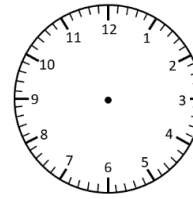


3:00 pm

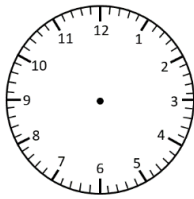


8:00 pm

+ 1 hour

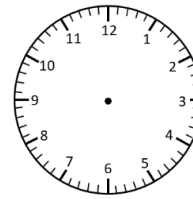


___ : ___

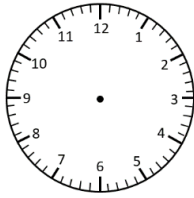


11:00 am

+ 3 hours

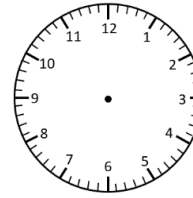


___ : ___

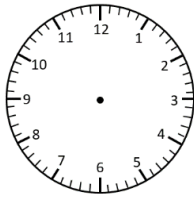


___ : ___

- 2 hours

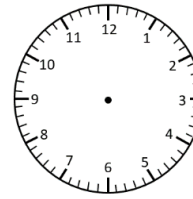


4:00 pm

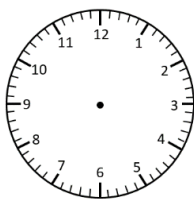


___ : ___

- 3 hours

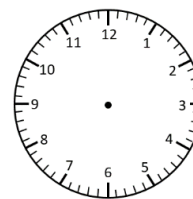


1:00 pm



11:00 am

+ 2 hours



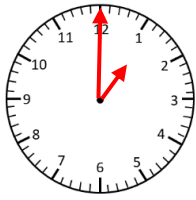
___ : ___

Elapsed Time Answers

Hour Intervals

Read the time. Add or subtract the elapsed time and write the new time.

Start Time



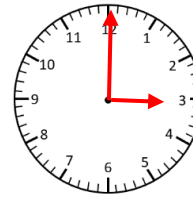
1:00 pm

Elapsed Time

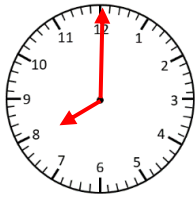
- 2 hours



End Time

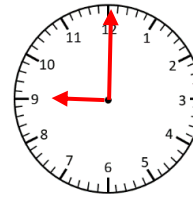


3:00 pm

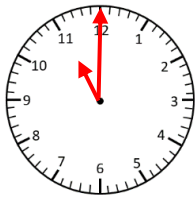


8:00 pm

+ 1 hour

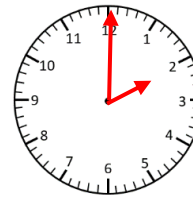


9:00 pm

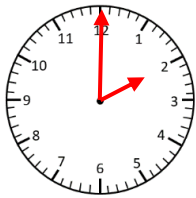


11:00 am

+ 3 hours

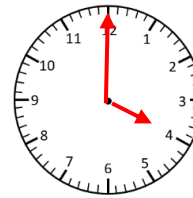


2:00 pm

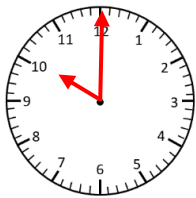


2:00 pm

- 2 hours

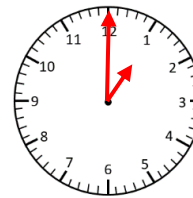


4:00 pm

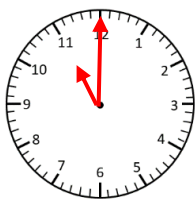


10:00 am

- 3 hours

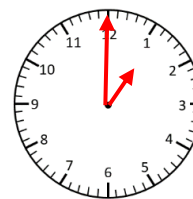


1:00 pm



11:00 am

+ 2 hours



1:00 pm

