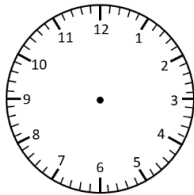


Elapsed Time

Hour & Half Hour Intervals

Read the time. Add on the elapsed time and write the new time (in analogue and digital).

Start Time



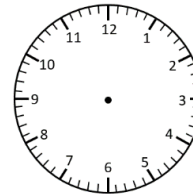
9:30 am

Elapsed Time

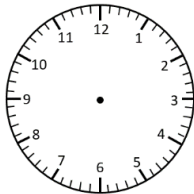
+ 1 hour



End Time

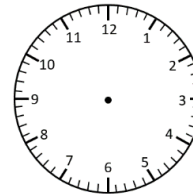


____ : ____

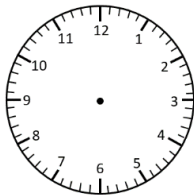


5:00 pm

+ 2 hours

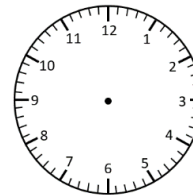


____ : ____

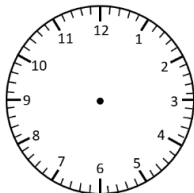


4:00 pm

+ 30 minutes

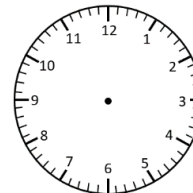


____ : ____

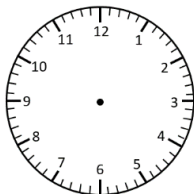


10:30 am

+ 30 minutes

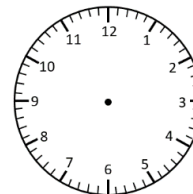


____ : ____

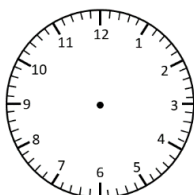


8:30 am

+ 2 hours

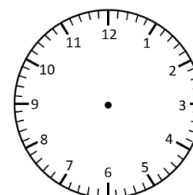


____ : ____



4:30 pm

+ 30 minutes



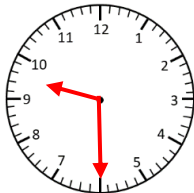
____ : ____

Elapsed Time Answers

Hour & Half Hour Intervals

Read the time. Add on the elapsed time and write the new time (in analogue and digital).

Start Time



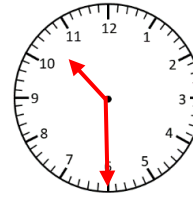
9:30 am

Elapsed Time

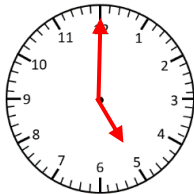
+ 1 hour



End Time

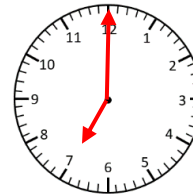


10:30 am

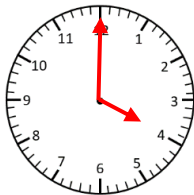


5:00 pm

+ 2 hours

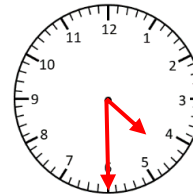


7:00 pm

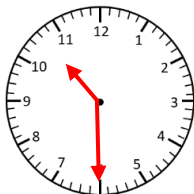


4:00 pm

+ 30 minutes

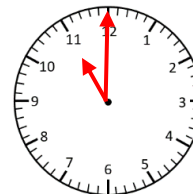


4:30 pm

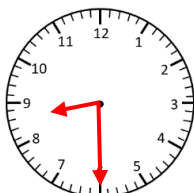


10:30 am

+ 30 minutes

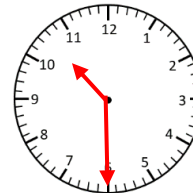


11:00 am

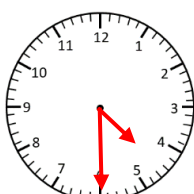


8:30 am

+ 2 hours



10:30 am



4:30 pm

+ 30 minutes



5:00 pm