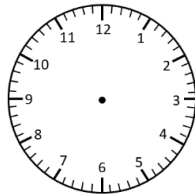


Elapsed Time

Hour & Half Hour Intervals

Read the time. Add or subtract the elapsed time and write the new time.

Start Time



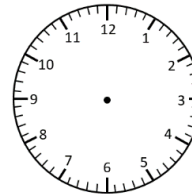
7:30 am

Elapsed Time

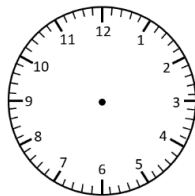
+ 1 hour



End Time

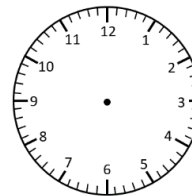


____ : ____

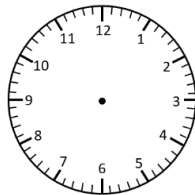


____ : ____

- 30 minutes

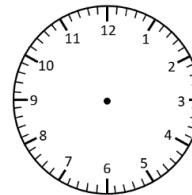


11:00 am

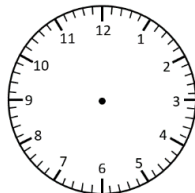


8:30 pm

+ 30 minutes

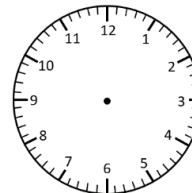


____ : ____

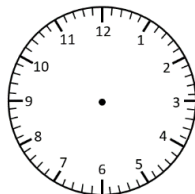


1:00 pm

+ 1 hour 30 minutes

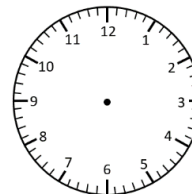


____ : ____

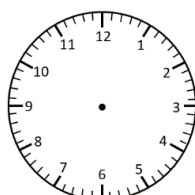


____ : ____

- 30 minutes

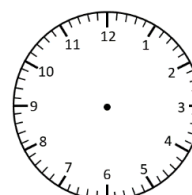


12:00 pm



____ : ____

- 2 hours 30 minutes



3:00 pm

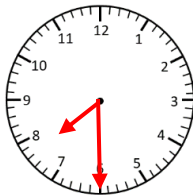


Elapsed Time **Answers**

Hour & Half Hour Intervals

Read the time. Add or subtract the elapsed time and write the new time.

Start Time



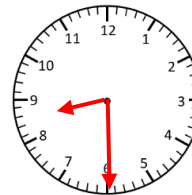
7:30 am

Elapsed Time

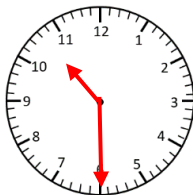
+ 1 hour



End Time

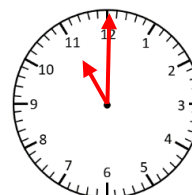


8:30 am

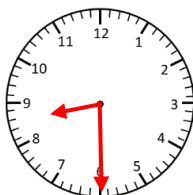


10:30 am

- 30 minutes



11:00 am

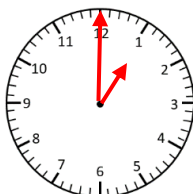


8:30 pm

+ 30 minutes

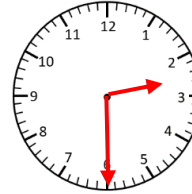


9:00 pm

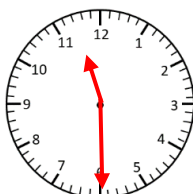


1:00 pm

+ 1 hour 30 minutes



2:30 pm

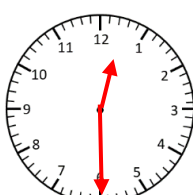


11:30 pm

- 30 minutes

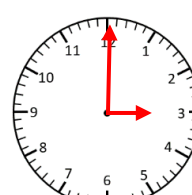


12:00 pm



12:30 pm

- 2 hours 30 minutes



3:00 pm

