



# Elapsed Time on a Number Line

Work out the **elapsed time** for each. Show your working on the number lines.


<u>Start Time</u>	<u>End Time</u>	<u>Elapsed Time</u>
9:15 pm	11:45 pm	_____ hr _____ mins

9:00 pm  10:45 pm


<u>Start Time</u>	<u>End Time</u>	<u>Elapsed Time</u>
2:15 pm	4:30 pm	_____ hr _____ mins




<u>Start Time</u>	<u>End Time</u>	<u>Elapsed Time</u>
6:30 am	8:15 am	_____ hr _____ mins



<u>Start Time</u>	<u>End Time</u>	<u>Elapsed Time</u>
8:45 pm	11:15 pm	_____ hr _____ mins



<u>Start Time</u>	<u>End Time</u>	<u>Elapsed Time</u>
11:15 am	3:45 pm	_____ hr _____ mins



# Elapsed Time on a Number Line **Answers**

Work out the **end times**. Show your working on the number lines.

Start Time

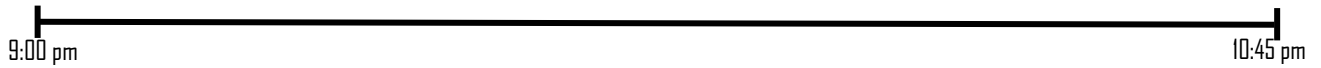
9:15 pm

End Time

11:45 pm

Elapsed Time

2 hr 30 mins



Start Time

2:15 pm

End Time

4:30 pm

Elapsed Time

2 hr 15 mins



Start Time

6:30 am

End Time

8:15 am

Elapsed Time

1 hr 45 mins



Start Time

8:45 pm

End Time

11:15 pm

Elapsed Time

2 hr 30 mins



Start Time

11:15 am

End Time

3:45 pm

Elapsed Time

4 hr 30 mins

