





# Elapsed Time on a Number Line


Work out the **elapsed time** for each. Show your working on the number lines.

<u>Start Time</u> 1:30 pm	<u>End Time</u> 6:15 pm	<u>Elapsed Time</u> ___ hr ___ mins
		

<u>Start Time</u> 9:15 am	<u>End Time</u> 11:05 am	<u>Elapsed Time</u> ___ hr ___ mins
		

<u>Start Time</u> 4:40 am	<u>End Time</u> 8:55 am	<u>Elapsed Time</u> ___ hr ___ mins
		

<u>Start Time</u> 5:23 pm	<u>End Time</u> 7:10 pm	<u>Elapsed Time</u> ___ hr ___ mins
		

<u>Start Time</u> 9:55 am	<u>End Time</u> 4:37 pm	<u>Elapsed Time</u> ___ hr ___ mins
		

# Elapsed Time on a Number Line **Answers**

Work out the **elapsed time** for each. Show your working on the number lines.

Start Time

1:30 pm

End Time

6:15 pm

Elapsed Time

4 hr 45 mins

1:30 pm

6:15 pm

Start Time

9:15 am

End Time

11:05 am

Elapsed Time

1 hr 50 mins

Start Time

4:40 am

End Time

8:55 am

Elapsed Time

4 hr 15 mins

Start Time

5:23 pm

End Time

7:10 pm

Elapsed Time

1 hr 47 mins

Start Time

9:55 am

End Time

4:37 pm

Elapsed Time

6 hr 42 mins

