



Elapsed Time on a Number Line

Work out the **elapsed time** for each. Show your working on the number lines.


<u>Start Time</u> 9:00 pm	<u>End Time</u> 10:30 pm	<u>Elapsed Time</u> ____ hr ____ mins
------------------------------	-----------------------------	--

9:00 pm  10:30 pm


<u>Start Time</u> 1:30 pm	<u>End Time</u> 2:30 pm	<u>Elapsed Time</u> ____ hr ____ mins
------------------------------	----------------------------	--




<u>Start Time</u> 5:00 am	<u>End Time</u> 7:30 am	<u>Elapsed Time</u> ____ hr ____ mins
------------------------------	----------------------------	--



<u>Start Time</u> 4:30 pm	<u>End Time</u> 6:00 pm	<u>Elapsed Time</u> ____ hr ____ mins
------------------------------	----------------------------	--




<u>Start Time</u> 10:30 am	<u>End Time</u> 1:30 pm	<u>Elapsed Time</u> ____ hr ____ mins
-------------------------------	----------------------------	--



Elapsed Time on a Number Line **Answers**


Work out the **elapsed time** for each. Show your working on the number lines.

<u>Start Time</u> 9:00 pm	<u>End Time</u> 10:30 pm	<u>Elapsed Time</u> 1 hr 30 mins
------------------------------	-----------------------------	-------------------------------------




A horizontal number line with tick marks at 9:00 pm on the left and 10:30 pm on the right.

<u>Start Time</u> 1:30 pm	<u>End Time</u> 2:30 pm	<u>Elapsed Time</u> 1 hr
------------------------------	----------------------------	-----------------------------




A horizontal number line with tick marks at 1:30 pm on the left and 2:30 pm on the right.

<u>Start Time</u> 5:00 am	<u>End Time</u> 7:30 am	<u>Elapsed Time</u> 2 hr 30 mins
------------------------------	----------------------------	-------------------------------------




A horizontal number line with tick marks at 5:00 am on the left and 7:30 am on the right.

<u>Start Time</u> 4:30 pm	<u>End Time</u> 6:00 pm	<u>Elapsed Time</u> 1 hr 30 mins
------------------------------	----------------------------	-------------------------------------



A horizontal number line with tick marks at 4:30 pm on the left and 6:00 pm on the right.

<u>Start Time</u> 10:30 am	<u>End Time</u> 1:30 pm	<u>Elapsed Time</u> 3 hr
-------------------------------	----------------------------	-----------------------------



A horizontal number line with tick marks at 10:30 am on the left and 1:30 pm on the right.