





Elapsed Time on a Number Line


Work out the **elapsed time** for each. Show your working on the number lines.

<u>Start Time</u> 3:00 pm	<u>End Time</u> 4:30 pm	<u>Elapsed Time</u> ____ hr ____ mins
		

<u>Start Time</u> 5:30 pm	<u>End Time</u> 8:30 pm	<u>Elapsed Time</u> ____ hr ____ mins
		

<u>Start Time</u> 1:00 pm	<u>End Time</u> 5:00 pm	<u>Elapsed Time</u> ____ hr ____ mins
		


<u>Start Time</u> 8:30 pm	<u>End Time</u> 9:30 pm	<u>Elapsed Time</u> ____ hr ____ mins
		

<u>Start Time</u> 1:30 pm	<u>End Time</u> 4:00 pm	<u>Elapsed Time</u> ____ hr ____ mins
		

Elapsed Time on a Number Line **Answers**


Work out the **elapsed time** for each. Show your working on the number lines.

<u>Start Time</u> 3:00 pm	<u>End Time</u> 4:30 pm	<u>Elapsed Time</u> 1 hr 30 mins
------------------------------	----------------------------	-------------------------------------




A horizontal number line with tick marks at 3:00 pm and 4:30 pm.

<u>Start Time</u> 5:30 pm	<u>End Time</u> 8:30 pm	<u>Elapsed Time</u> 3 hr
------------------------------	----------------------------	-----------------------------




A horizontal number line with tick marks at 5:30 pm and 8:30 pm.

<u>Start Time</u> 1:00 pm	<u>End Time</u> 5:00 pm	<u>Elapsed Time</u> 4 hr
------------------------------	----------------------------	-----------------------------




A horizontal number line with tick marks at 1:00 pm and 5:00 pm.

<u>Start Time</u> 8:30 pm	<u>End Time</u> 9:30 pm	<u>Elapsed Time</u> 1 hr
------------------------------	----------------------------	-----------------------------



A horizontal number line with tick marks at 8:30 pm and 9:30 pm.

<u>Start Time</u> 1:30 pm	<u>End Time</u> 4:00 pm	<u>Elapsed Time</u> 2 hr 30 mins
------------------------------	----------------------------	-------------------------------------



A horizontal number line with tick marks at 1:30 pm and 4:00 pm.