


Elapsed Time on a Number Line


Work out the **elapsed time** for each. Show your working on the number lines.

<u>Start Time</u> 6:50 pm	<u>End Time</u> 7:35 pm	<u>Elapsed Time</u> ___ hr ___ mins
------------------------------	----------------------------	--




A horizontal number line with tick marks at 6:50 pm on the left and 7:35 pm on the right.

<u>Start Time</u> 3:10 pm	<u>End Time</u> 6:25 pm	<u>Elapsed Time</u> ___ hr ___ mins
------------------------------	----------------------------	--




A horizontal number line with tick marks at 3:10 pm on the left and 6:25 pm on the right.

<u>Start Time</u> 11:45 am	<u>End Time</u> 2:10 pm	<u>Elapsed Time</u> ___ hr ___ mins
-------------------------------	----------------------------	--




A horizontal number line with tick marks at 11:45 am on the left and 2:10 pm on the right.

<u>Start Time</u> 7:35 pm	<u>End Time</u> 9:05 pm	<u>Elapsed Time</u> ___ hr ___ mins
------------------------------	----------------------------	--



A horizontal number line with tick marks at 7:35 pm on the left and 9:05 pm on the right.

<u>Start Time</u> 2:10 pm	<u>End Time</u> 5:45 pm	<u>Elapsed Time</u> ___ hr ___ mins
------------------------------	----------------------------	--



A horizontal number line with tick marks at 2:10 pm on the left and 5:45 pm on the right.

Elapsed Time on a Number Line **Answers**

Work out the **elapsed time** for each. Show your working on the number lines.

Start Time

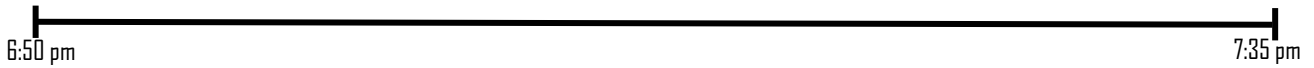
6:50 pm

End Time

7:35 pm

Elapsed Time

0 hr 45 mins



Start Time

3:10 pm

End Time

6:25 pm

Elapsed Time

3 hr 15 mins



Start Time

11:45 am

End Time

2:10 pm

Elapsed Time

2 hr 25 mins



Start Time

7:35 pm

End Time

9:05 pm

Elapsed Time

1 hr 30 mins



Start Time

2:10 pm

End Time

5:45 pm

Elapsed Time

3 hr 35 mins

