

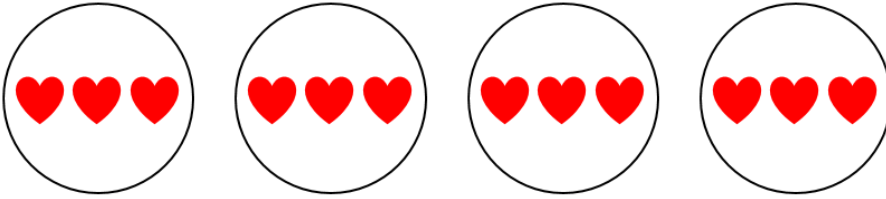
# Representing Groups

## Multiplication

Draw pictures to match. Write the matching equation.

4 groups of 3 hearts

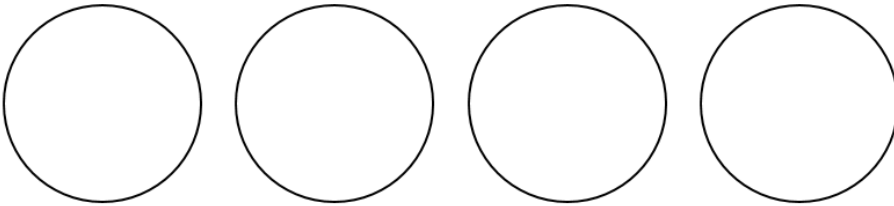
Equation



$$\underline{\quad} \times \underline{\quad} = \underline{\quad}$$

4 groups of 5 triangles


Equation



$$\underline{\quad} \times \underline{\quad} = \underline{\quad}$$

5 groups of 2 stars


Equation



$$\underline{\quad} \times \underline{\quad} = \underline{\quad}$$

3 groups of 6 books

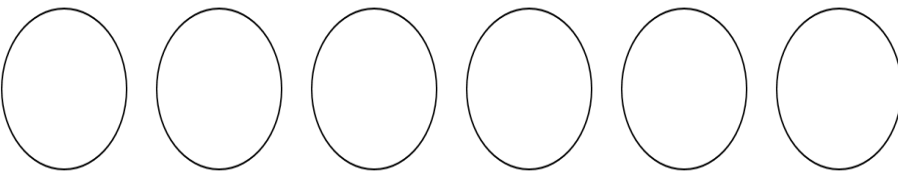
Equation



$$\underline{\quad} \times \underline{\quad} = \underline{\quad}$$

6 groups of 3 pencils

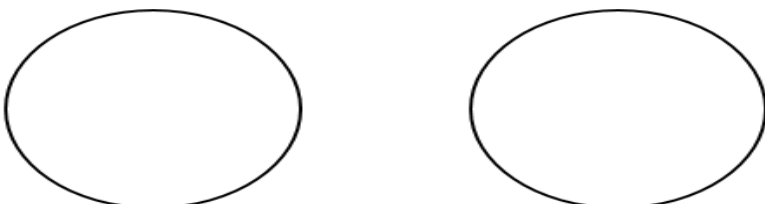
Equation



$$\underline{\quad} \times \underline{\quad} = \underline{\quad}$$

2 groups of 7 dogs

Equation



$$\underline{\quad} \times \underline{\quad} = \underline{\quad}$$