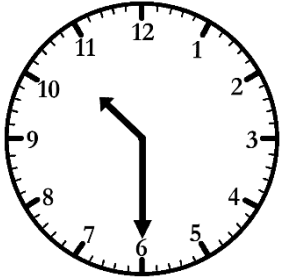


# Matching Times


## Half Past Times

Draw lines to connect the matching times.



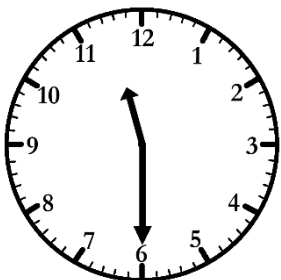
1:30

half past 5




11:30

half past 8



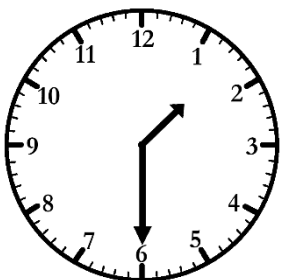
5:30

half past 1



10:30

half past 10



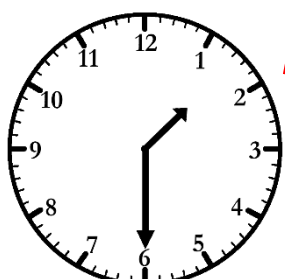

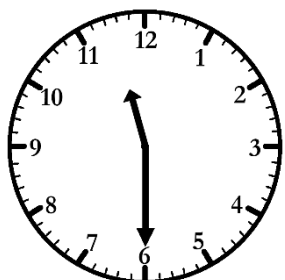

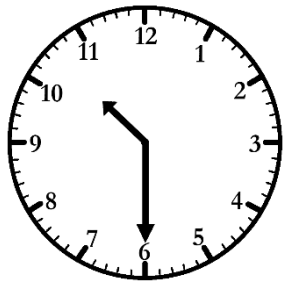
8:30

half past 11

# Matching Times **Answers**

## Half Past Times

Draw lines to connect the matching times.



1:30

11:30

5:30

10:30

8:30

half past 5

half past 8

half past 1

half past 10

half past 11